

SECTION 2

Supply and Demand



Socksrunner/Alamy stock Photo

Module 5 Supply and Demand: Introduction and Demand

Module 6 Supply and Demand: Supply

Module 7 Supply and Demand: Equilibrium

Module 8 Supply and Demand: Price Controls (Ceilings and Floors)

Module 9 Supply and Demand: Quantity Controls

economics by example *The Coffee Market's Hot; Why Are Bean Prices Not?*

Blue Jean Blues

These days you may be used to paying \$50, \$100, or more for a pair of blue jeans, but consumers in 2012 may have been shocked by a dramatic increase in the price of jeans compared to the previous year. Or maybe not: fashions change, and maybe they thought they were paying the price for being fashionable. But consumers in 2012 weren't paying for some new innovation in fashion—they were paying for cotton. Jeans are made of denim, a particular weave of cotton. In 2011, when jeans manufacturers were buying supplies for the coming year, the price of cotton climbed to more than triple its level just two years earlier. In March 2011, the price of a pound of cotton hit an all-time high, the highest cotton price since record keeping began in 1870.

Why were cotton prices so high? On one side, demand for clothing of all

kinds was surging. On the supply side, severe weather events hit world cotton production. Most notably, Pakistan, the world's fourth-largest cotton producer, was hit by devastating floods that put one-fifth of the country underwater and virtually destroyed its cotton crop. But by 2012 the supply of cotton rebounded and the price of cotton fell by 62% (a change that would be reflected in clothing prices in 2013). After some smaller ups and downs in the intervening five years, the price of cotton in 2018 remained at approximately 59% of its 2011 high.

The rise in cotton prices in 2011 was not all bad news for everyone connected with the cotton trade. In the United States, cotton producers had not been hit by bad weather and were benefiting from the higher prices. American farmers responded to high cotton prices by sharply increasing

the acreage they devoted to the crop. None of these measures were enough, however, to produce immediate price relief.

Wait a minute: how, exactly, does flooding in Pakistan translate into higher jeans prices or more polyester instead of cotton, in your T-shirts? It's a matter of supply and demand—but what does that mean? Many people use “supply and demand” as a catchphrase to mean “the laws of the marketplace at work.” To economists, however, the concept of supply and demand has a precise meaning: it is a *model* of market behavior that is extremely useful for understanding many—but not all—markets.

In this section, we lay out the pieces that make up the *supply and demand model*, put them together, and show how this model can be used to understand how most markets behave.

Supply and Demand: Introduction and Demand

In this Module, you will learn to:

- Explain what a competitive market is and how it is described by the supply and demand model
- Draw a demand curve and interpret its meaning
- Discuss the difference between movements along the demand curve and changes in demand
- List and describe the factors that shift the demand curve

Introduction and Demand



Levi's may be a popular brand of jeans, but they account for only a tiny fraction of all cotton transactions.

A **competitive market** is a market in which there are many buyers and sellers of the same good or service, none of whom can influence the price at which the good or service is sold.

The **supply and demand model** is a model of how a competitive market works.

Cotton sellers and cotton buyers constitute a *market*—a group of producers and consumers who exchange a good or service for payment. In this section, we'll focus on a particular type of market known as a *competitive market*. Roughly, a **competitive market** is one in which there are many buyers and sellers of the same good or service. More precisely, the key feature of a competitive market is that no individual's actions have a noticeable effect on the price at which the good or service is sold. It's important to understand, however, that this is not an accurate description of every market. For example, it's not an accurate description of the market for cola beverages. That's because in the market for cola beverages, Coca-Cola and Pepsi account for such a large proportion of total sales that they are able to influence the price at which cola beverages are bought and sold. But it *is* an accurate description of the market for cotton. The global marketplace for cotton is so huge that even a jeans retailer as large as Levi Strauss & Co. accounts for only a tiny fraction of transactions, making it unable to influence the price at which cotton is bought and sold.

It's a little hard to explain why competitive markets are different from other markets until we've seen how a competitive market works. For now, let's just say that it's easier to model competitive markets than other markets.

When a market is competitive, its behavior is well described by the **supply and demand model**. Because many markets *are* competitive, the supply and demand model is a very useful one indeed.

There are six key elements in the supply and demand model:

- The *demand curve*
- The set of factors that cause the demand curve to shift
- The *supply curve*
- The set of factors that cause the supply curve to shift
- The *market equilibrium*, which includes the *equilibrium price* and *equilibrium quantity*
- The way the market equilibrium changes when the supply curve or demand curve shifts

To explain the supply and demand model, we will examine each of these elements in turn. In this Module we begin with the demand curve and then discuss the factors that cause the demand curve to shift.

The Demand Curve

How many pounds of cotton, packaged in the form of blue jeans, do consumers around the world want to buy in a given year? You might at first think that we can answer this question by multiplying the number of pairs of blue jeans purchased

AP[®] EXAM TIP

For success on the AP[®] exam you must be able to draw, label, and interpret supply and demand graphs. These graphs are also the foundation of other graphs you will learn in the course.

around the world each day by the amount of cotton it takes to make a pair of jeans, and then multiplying by 365. But that’s not enough to answer the question because how many pairs of jeans—in other words, how many pounds of cotton—consumers want to buy depends on the price of cotton. When the price of cotton rises, as it did in 2011, some people will respond to the higher price of cotton clothing by buying fewer cotton garments or, perhaps, by switching completely to garments made from other materials, such as synthetics or linen. In general, the quantity of cotton clothing, or of any good or service that people want to buy (taking “want” to mean they are willing and able to buy it), depends on the price. The higher the price, the less of the good or service people want to purchase; alternatively, the lower the price, the more they want to purchase.

So the answer to the question “How many pounds of cotton do consumers want to buy?” depends on the price of a pound of cotton. If you don’t yet know what the price will be, you can start by making a table of how many pounds of cotton people would want to buy at a number of different prices. Such a table is known as a *demand schedule*. This, in turn, can be used to draw a *demand curve*, which is one of the key elements of the supply and demand model.

AP® EXAM TIP

In several common economics graphs, including the graph of supply and demand, the dependent variable is on the vertical axis and the independent variable is on the horizontal axis. You learned the opposite convention in math and science class.

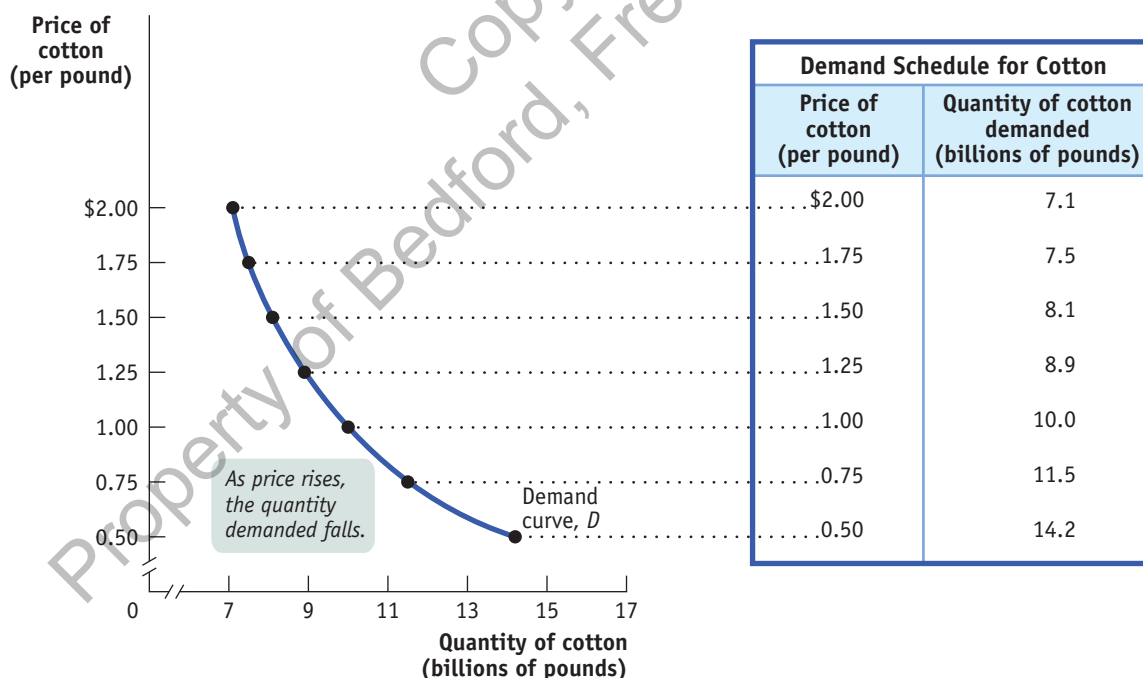
The Demand Schedule and the Demand Curve

A **demand schedule** is a table that shows how much of a good or service consumers will want to buy at different prices. On the right side of **Figure 5.1**, we show a hypothetical demand schedule for cotton. It’s hypothetical in that it doesn’t use actual data on the world demand for cotton. The demand schedule assumes that all cotton is of equal quality.

According to the table, if cotton costs \$1 a pound, consumers around the world will want to purchase 10 billion pounds of cotton over the course of a year. If the price is

A **demand schedule** shows how much of a good or service consumers will be willing and able to buy at different prices.

Figure 5.1 The Demand Schedule and the Demand Curve



The demand schedule for cotton yields the corresponding demand curve, which shows how much of a good or service consumers want to buy at any given price. The demand curve and the demand

schedule reflect the law of demand: As price rises, the quantity demanded falls. Similarly, a decrease in price raises the quantity demanded. As a result, the demand curve is downward-sloping.

The **quantity demanded** is the actual amount of a good or service consumers are willing and able to buy at some specific price. It is shown as a single point in a demand schedule or along a demand curve.

A **demand curve** is a graphical representation of the demand schedule. It shows the relationship between quantity demanded and price.

The **law of demand** says that a higher price for a good or service, all other things being equal, leads people to demand a smaller quantity of that good or service.

\$1.25 a pound, they will want to buy only 8.9 billion pounds; if the price is only \$0.75 a pound, they will want to buy 11.5 billion pounds; and so on. So the higher the price, the fewer pounds of cotton consumers will want to purchase. In other words, as the price rises, the **quantity demanded** of cotton—the actual amount consumers are willing and able to buy at a specific price—falls.

The graph in Figure 5.1 is a visual representation of the information in the table. The vertical axis shows the price of a pound of cotton and the horizontal axis shows the quantity of cotton in pounds. Each point on the graph corresponds to one of the entries in the table. The curve that connects these points is a **demand curve**, a graphical representation of the demand schedule, which is another way of showing the relationship between the quantity demanded and the price.

Note that the demand curve shown in Figure 5.1 slopes downward. This reflects the general proposition that a higher price reduces the quantity demanded. For example, jeans-makers know they will sell fewer pairs of jeans when the price of jeans is higher, reflecting a \$2 price per pound of cotton, compared to the number they will sell when the price of jeans is lower, reflecting a price of only \$1 per pound of cotton. When the price of jeans is relatively high, some people buy pants less often, and some people buy pants made of wool, linen, or synthetics instead of cotton. In the real world, demand curves almost always slope downward. It is so likely that, all other things being equal, a higher price for a good will lead people to demand a smaller quantity of it, that economists are willing to call it a “law”—the **law of demand**.

Shifts of the Demand Curve

Even though cotton prices were higher in 2013 than they had been in 2012, total world consumption of cotton was higher in 2013. How can we reconcile this fact with the law of demand, which says that a higher price reduces the quantity demanded, all other things being equal?

The answer lies in the crucial phrase *all other things being equal*. In this case, all other things weren't equal: there were changes between 2012 and 2013 that increased the quantity of cotton demanded at any given price. For one thing, the world's population increased by 77 million, and therefore the number of potential wearers of cotton clothing increased. In addition, higher incomes in countries like China allowed people to buy more clothing than before. These changes led to an increase in the quantity of cotton demanded at any given price. **Figure 5.2** illustrates this phenomenon using the demand schedule and demand curve for cotton. (As before, the numbers in Figure 5.2 are hypothetical.)

The table in Figure 5.2 shows two demand schedules. The first is a demand schedule for 2012, the same one shown in Figure 5.1. The second is a demand schedule for 2013. It differs from the 2012 demand schedule due to factors such as a larger population and higher incomes, factors that led to an increase in the quantity of cotton demanded at any given price. So at each price, the 2013 schedule shows a larger quantity demanded than the 2012 schedule. For example, the quantity of cotton consumers wanted to buy at a price of \$1 per pound increased from 10 billion to 12 billion pounds per year, the quantity demanded at \$1.25 per pound went from 8.9 billion to 10.7 billion pounds, and so on.

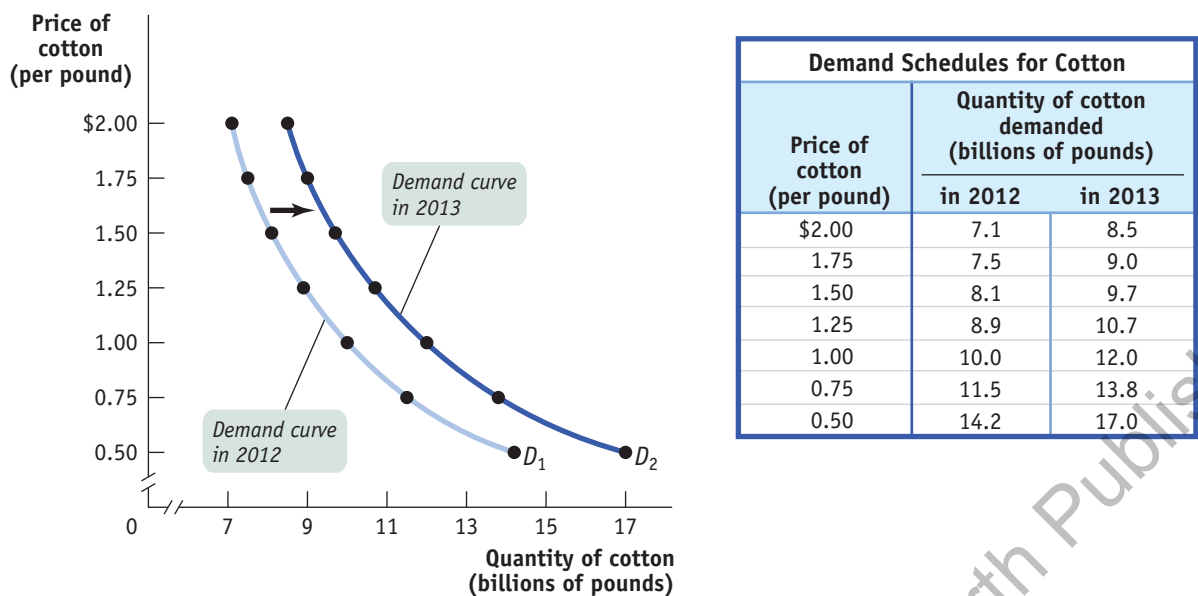
What is clear from this example is that the changes that occurred between 2012 and 2013 generated a *new* demand schedule, one in which the quantity demanded was greater at any given price than in the original demand schedule. The two curves in Figure 5.2 show the same information graphically. As you can see, the demand schedule for 2013 corresponds to a new demand curve, D_2 , that is to the right of the demand curve for 2012, D_1 . This **change in demand** shows the increase in the quantity demanded at any given price, represented by the shift in position of the original demand curve, D_1 , to its new location at D_2 .

AP® EXAM TIP

A price change causes a change in the quantity demanded, shown by a movement along the demand curve. When a nonprice factor of demand changes, this changes demand, and therefore shifts the demand curve. It is correct to say that an increase in the price of apples decreases the *quantity of apples demanded*; it is incorrect to say that an increase in the price of apples *decreases the demand for apples*.

A **change in demand** is a shift of the demand curve, which changes the quantity demanded at any given price.

Figure 5.2 An Increase in Demand



Increases in population and income, among other changes, generate an increase in demand—a rise in the quantity demanded at any given price. This is represented by the two demand schedules—one showing demand in 2012, before the rise in

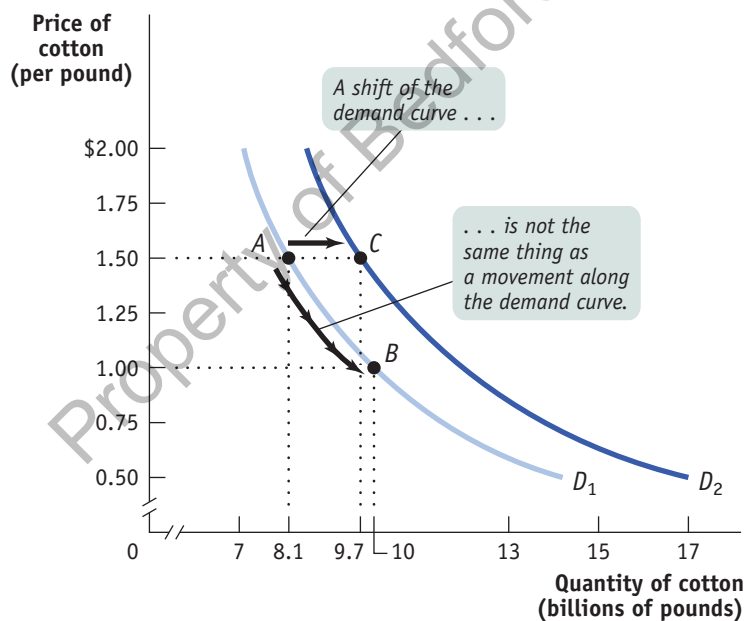
population and income, and the other showing demand in 2013, after the rise in population and income—and their corresponding demand curves. The increase in demand shifts the demand curve to the right.

It’s crucial to make the distinction between such changes in demand and **movements along the demand curve**, changes in the quantity demanded of a good that result from a change in that good’s price. **Figure 5.3** illustrates the difference.

The movement from point A to point B is a movement along the demand curve: the quantity demanded rises due to a fall in price as you move down D_1 . Here, a fall in the price of cotton from \$1.50 to \$1 per pound generates a rise in the quantity demanded

A **movement along the demand curve** is a change in the quantity demanded of a good that is the result of a change in that good’s price.

Figure 5.3 A Movement Along the Demand Curve Versus a Shift of the Demand Curve



The rise in the quantity demanded when going from point A to point B reflects a movement along the demand curve: it is the result of a fall in the price of the good. The rise in the quantity demanded when going from point A to point C reflects a change in demand: this shift to the right is the result of a rise in the quantity demanded at any given price.

from 8.1 billion to 10 billion pounds per year. But the quantity demanded can also rise when the price is unchanged if there is an *increase in demand*—a rightward shift of the demand curve. This is illustrated in Figure 5.3 by the shift of the demand curve from D_1 to D_2 . Holding the price constant at \$1.50 a pound, the quantity demanded rises from 8.1 billion pounds at point A on D_1 to 9.7 billion pounds at point C on D_2 .

When economists talk about a “change in demand,” saying “the demand for X increased” or “the demand for Y decreased,” they mean that the demand curve for X or Y shifted—not that the quantity demanded rose or fell because of a change in the price.

Understanding Shifts of the Demand Curve

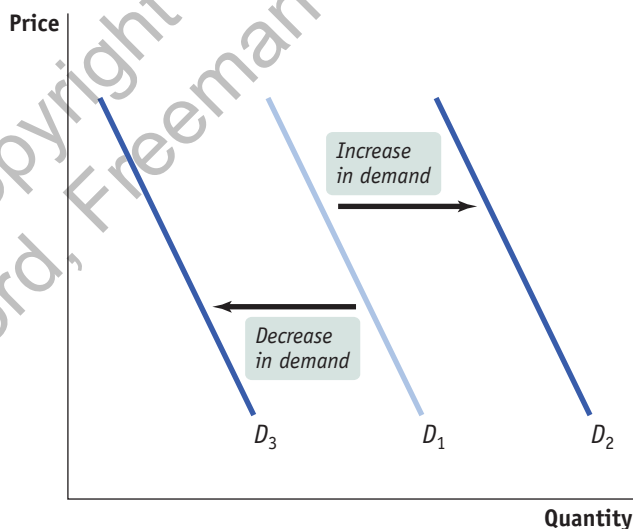
Figure 5.4 illustrates the two basic ways in which demand curves can shift. When economists talk about an “increase in demand,” they mean a *rightward* shift of the demand curve: at any given price, consumers demand a larger quantity of the good or service than before. This is shown by the rightward shift of the original demand curve D_1 to D_2 . And when economists talk about a “decrease in demand,” they mean a *leftward* shift of the demand curve: at any given price, consumers demand a smaller quantity of the good or service than before. This is shown by the leftward shift of the original demand curve D_1 to D_3 .

What caused the demand curve for cotton to shift? We have already mentioned two reasons: changes in population and income. If you think about it, you can come up with other things that would be likely to shift the demand curve for cotton. For example, suppose that the price of polyester rises. This will induce some people who previously bought polyester clothing to buy cotton clothing instead, increasing the demand for cotton.

AP® EXAM TIP

When shifting curves, a decrease is shown as a movement to the left and an increase is shown as a movement to the right. Quantity is measured on the horizontal axis and is lower to the left and higher to the right. Remember “*left is less and right is more.*”

Figure 5.4 Shifts of the Demand Curve



Any event that increases demand shifts the demand curve to the right, reflecting a rise in the quantity demanded at any given price. Any event that decreases demand shifts the demand curve to the left, reflecting a fall in the quantity demanded at any given price.

AP® EXAM TIP

The mnemonic **TRIBE** can help you remember the factors that shift demand. Demand is shifted by changes in . . . **T**astes, prices of **R**elated goods, **I**ncome, the number of **B**uyers, and **E**xpectations.

There are five principal factors that shift the demand curve for a good or service:

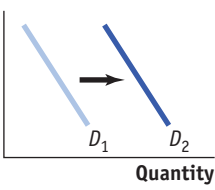
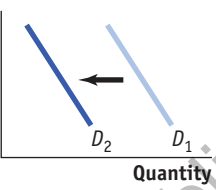
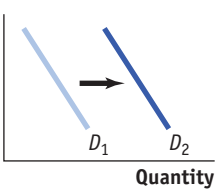
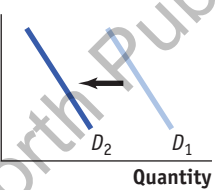
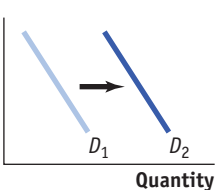
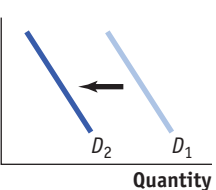
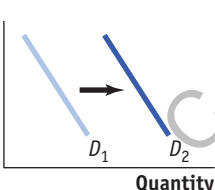
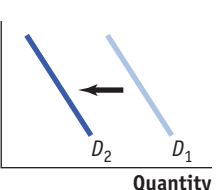
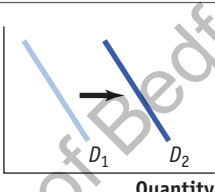
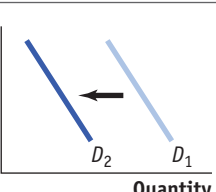
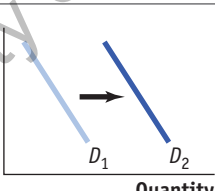
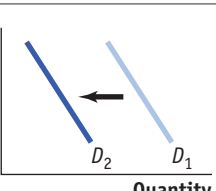
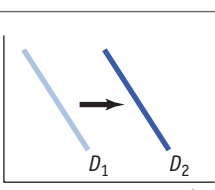
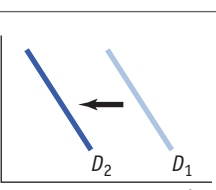
- Changes in tastes
- Changes in the prices of related goods or services
- Changes in income
- Changes in the number of consumers (buyers)
- Changes in expectations

Although this is not an exhaustive list, it contains the five most important factors that can shift demand curves. Changes in demand can generally be viewed as a change in one of these factors. So when we say that the quantity of a good or service demanded falls

as its price rises, all other things being equal, we are in fact stating that the factors that shift demand are remaining unchanged.

Table 5.1 gives an overview of the ways that these five factors can shift demand. Next, we explore in detail how these factors shift the demand curve.

Table 5.1 Factors That Shift Demand

When this happens demand increases	But when this happens demand decreases
When tastes change in favor of a good . . .	 <p>... demand for the good increases.</p>	 <p>... demand for the good decreases.</p>	
When the price of a related good such as a substitute rises . . .	 <p>... demand for the original good increases.</p>	 <p>... demand for the original good decreases.</p>	
When the price of a related good such as a complement falls . . .	 <p>... demand for the original good increases.</p>	 <p>... demand for the original good decreases.</p>	
When income rises . . .	 <p>... demand for a normal good increases.</p>	 <p>... demand for a normal good decreases.</p>	
When income falls . . .	 <p>... demand for an inferior good increases.</p>	 <p>... demand for an inferior good decreases.</p>	
When the number of buyers rises . . .	 <p>... market demand for the good increases.</p>	 <p>... market demand for the good decreases.</p>	
When the price is expected to rise in the future . . .	 <p>... demand for the good increases today.</p>	 <p>... demand for the good decreases today.</p>	

Changes in Tastes Why do people want what they want? Fortunately, we don't need to answer that question—we just need to acknowledge that people have certain preferences, or tastes, that determine what they choose to consume and that these tastes can change. Economists usually lump together changes in demand due to fads, beliefs, cultural shifts, and so on under the heading of changes in *tastes*.

For example, once upon a time men wore hats. Up until around World War II, a respectable man wasn't fully dressed unless he wore a dignified hat along with his suit. But the returning soldiers adopted a more informal style, perhaps due to the rigors of the war. And President Eisenhower, who had been supreme commander of Allied Forces before becoming president, often went hatless. After World War II, it was clear that the demand curve for hats had shifted leftward, reflecting a decrease in the demand for hats.

Economists have little to say about the forces that influence consumers' tastes. (Marketers and advertisers, however, have plenty to say about them!) However, a *change* in tastes has a predictable impact on demand. When tastes change in favor of a good, more people want to buy it at any given price, so the demand curve shifts to the right. When tastes change against a good, fewer people want to buy it at any given price, so the demand curve shifts to the left.

Two goods are **substitutes** if a rise in the price of one of the goods leads to an increase in the demand for the other good.



Felix Choo/Alamy

Two goods are **complements** if a rise in the price of one of the goods leads to a decrease in the demand for the other good.

Changes in the Prices of Related Goods or Services While there's nothing quite like a comfortable pair of all-cotton blue jeans, for some purposes khakis—typically made from polyester blends—are a bad alternative. Khakis are what economists call a *substitute* for jeans. A pair of goods are **substitutes** if a rise in the price of one good (jeans) makes consumers more willing to buy the other good (polyester-blend khakis). Substitutes are usually goods that in some way serve a similar function: coffee and tea, muffins and doughnuts, train rides and airplane rides. A rise in the price of the alternative good induces some consumers to purchase the original good *instead* of it, shifting demand for the original good to the right. Likewise, when the price of the alternative good falls, some consumers switch from the original good to the alternative, shifting the demand curve for the original good to the left.

But sometimes a fall in the price of one good makes consumers *more* willing to buy another good. Such pairs of goods are known as **complements**. Complements are goods that in some sense are consumed together: smartphones and apps, cookies and milk, cars and gasoline. Because consumers like to consume a good and its complement together, a change in the price of one of the goods will affect the demand for its complement. In particular, when the price of one good rises, the demand for its complement decreases, shifting the demand curve for the complement to the left. So a rise in the price of cookies is likely to cause a leftward shift in the demand curve for milk, as people consume fewer snacks of cookies and milk. Likewise, when the price of one good falls, the demand for its complement increases, shifting the demand curve for the complement to the right. This means that if, for some reason, the price of cookies falls, we should see a rightward shift in the demand curve for milk, as people consume more cookies *and* more milk.

Changes in Income When individuals have more income, they are normally more likely to purchase a good or service at any given price. For example, if a family's income rises, it is more likely to take that summer trip to Disney World—and therefore also more likely to buy plane tickets. So a rise in consumer incomes will cause the demand curves for most goods to shift to the right.

Why do we say “most goods,” rather than “all goods”? Most goods are **normal goods**—the demand for them increases when consumer incomes rise. However, the demand for some goods decreases when incomes rise—these goods are known as **inferior goods**. Usually an inferior good is one that is considered less desirable than more expensive alternatives—such as a bus ride versus a taxi ride. When they can afford to, people stop buying an inferior good and switch their consumption to the preferred, more expensive alternative. So when a good is inferior, a rise in income

When a rise in income increases the demand for a good—the normal case—it is a **normal good**. When a rise in income decreases the demand for a good, it is an **inferior good**.

shifts the demand curve to the left. And, not surprisingly, a fall in income shifts the demand curve to the right.

Consider the difference between so-called casual-dining restaurants such as Applebee's and Olive Garden and fast-food chains such as McDonald's and KFC. When their incomes rise, Americans tend to eat out more at casual-dining restaurants. However, some of this increased dining out comes at the expense of fast-food venues—to some extent, people visit McDonald's less once they can afford to move upscale. So casual dining is a normal good, while fast food appears to be an inferior good.

Changes in the Number of Consumers (Buyers) As we've already noted, one of the reasons for rising cotton demand between 2012 and 2013 was a growing world population. Because of population growth, overall demand for cotton would have risen even if the demand of each individual wearer of cotton clothing had remained unchanged. How the number of consumers affects the market demand curve is described in detail in the next section.

Changes in Expectations When consumers have some choice about when to make a purchase, current demand for a good or service is often affected by expectations about its future price. For example, savvy shoppers often wait for seasonal sales—say, buying next year's holiday gifts during the post-holiday markdowns. In this case, expectations of a future drop in price lead to a decrease in demand today. Alternatively, expectations of a future rise in price are likely to cause an increase in demand today. For example, if you heard that the price of jeans would increase next year, you might go out and buy an extra pair now.

Changes in expectations about future income can also lead to changes in demand. If you learned today that you would inherit a large sum of money sometime in the future, you might borrow some money today and increase your demand for certain goods. On the other hand, if you learned that you would earn less in the future than you thought, you might reduce your demand for some goods and save more money today.

Individual Versus Market Demand Curves

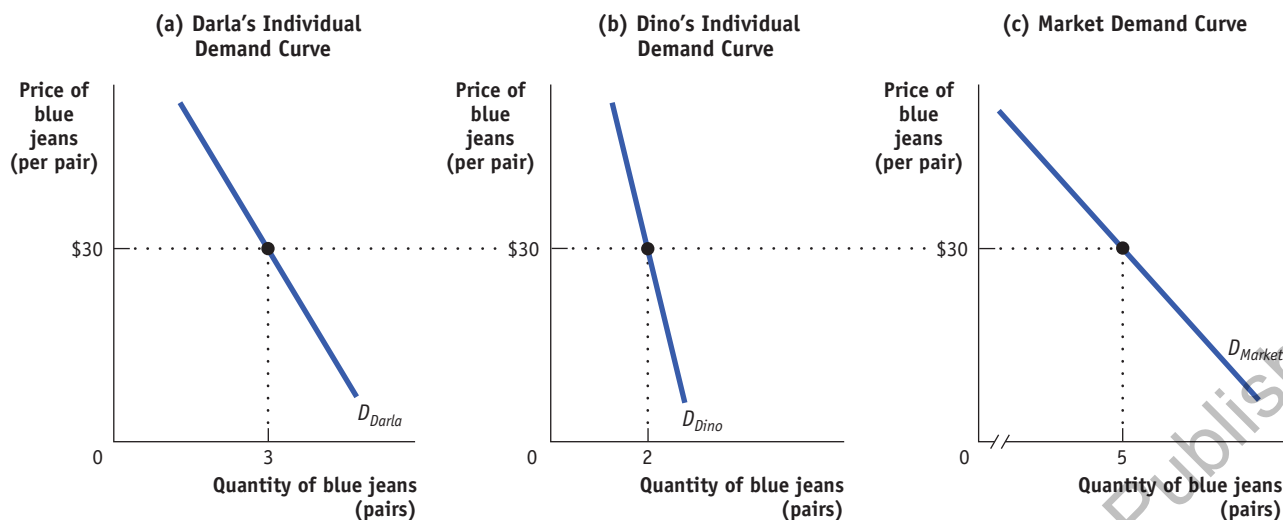
In talking about demand we have discussed both an individual's demand for blue jeans and the market demand for blue jeans. Now let's distinguish between an **individual demand curve**, which shows the relationship between quantity demanded and price for an individual consumer, and a market demand curve, which shows the combined demand by all consumers. For example, suppose that Darla is a consumer of cotton blue jeans; also suppose that all blue jeans are the same, so they sell for the same price. Panel (a) of **Figure 5.5** shows how many pairs of jeans she will buy per year at any given price per pair. Then D_{Darla} is Darla's individual demand curve.

The *market demand curve* shows how the combined quantity demanded by all consumers depends on the market price of that good. (Most of the time, when economists refer to the demand curve, they mean the market demand curve.) The market demand curve is the *horizontal sum* of the individual demand curves of all consumers in that market. To see what we mean by the term *horizontal sum*, assume for a moment that there are only two consumers of blue jeans, Darla and Dino. Dino's individual demand curve, D_{Dino} , is shown in panel (b). Panel (c) shows the market demand curve. At any given price, the quantity demanded by the market is the sum of the quantities demanded by Darla and Dino. For example, at a price of \$30 per pair, Darla demands three pairs of jeans per year and Dino demands two pairs per year. So the quantity demanded by the market is five pairs per year.

Clearly, the quantity demanded by the market at any given price is larger with Dino present than it would be if Darla were the only consumer. The quantity demanded at any given price would be even larger if we added a third consumer, then a fourth, and so on. So an increase in the number of consumers leads to an increase in demand.

An **individual demand curve** illustrates the relationship between quantity demanded and price for an individual consumer.

Figure 5.5 Individual Demand Curves and the Market Demand Curve



Darla and Dino are the only two consumers of blue jeans in the market. Panel (a) shows Darla's individual demand curve: the number of pairs of jeans she will buy per year at any given price. Panel (b) shows Dino's individual demand curve. Given that Darla and Dino are the only two consumers, the *market demand curve*,

which shows the quantity of blue jeans demanded by all consumers at any given price, is shown in panel (c). The market demand curve is the *horizontal sum* of the individual demand curves of all consumers. In this case, at any given price, the quantity demanded by the market is the sum of the quantities demanded by Darla and Dino.

MODULE 5 REVIEW



**Adventures in
AP[®] Economics**

Watch the video: **Demand**

Check Your Understanding

- Explain whether each of the following events represents (i) a *change in demand* (a *shift* of the demand curve) or (ii) a *movement along* the demand curve (a *change in the quantity demanded*).
 - A store owner finds that customers are willing to pay more for umbrellas on rainy days.
 - When XYZ Mobile, a cellular plan provider, offered reduced rates on data charges, its volume data usage by users increased sharply.
 - People buy more long-stem roses the week of Valentine's Day, even though the prices are higher than at other times during the year.
 - A sharp rise in the price of gasoline leads many commuters to join carpools in order to reduce their gasoline purchases.

TACKLE THE AP[®] TEST: Multiple-Choice Questions

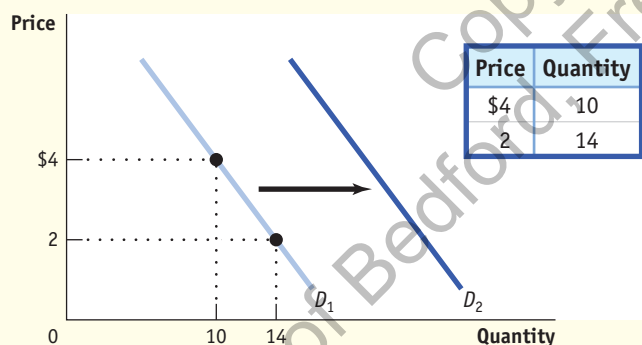
- Which of the following is true in a competitive market?
 - there are many buyers and sellers
 - each firm sells a different variety of the product
 - buyers can influence the market price
 - sellers can influence the market price
 - all of the above
- The law of demand states that the relationship between price and the quantity demanded is
 - positive.
 - negative.
 - direct.
 - unclear.
 - weak.

3. Which of the following would increase demand for a normal good? A decrease in
 - a. price.
 - b. income.
 - c. the price of a substitute.
 - d. consumer taste for a good.
 - e. the price of a complement.
4. A decrease in the price of butter would most likely decrease the demand for
 - a. margarine.
 - b. bagels.
 - c. jelly.
 - d. milk.
 - e. syrup.
5. If an increase in income leads to a decrease in demand, the good is
 - a. a complement.
 - b. a substitute.
 - c. inferior.
 - d. abnormal.
 - e. normal.
6. Which of the following will occur if consumers expect the price of a good to fall in the coming months?
 - a. The quantity demanded will rise today.
 - b. The quantity demanded will remain the same today.
 - c. Demand will increase today.
 - d. Demand will decrease today.
 - e. No change will occur today.
7. Which of the following will increase the demand for disposable diapers?
 - a. a new “baby boom”
 - b. concern over the environmental effect of landfills
 - c. a decrease in the price of cloth diapers
 - d. a move toward earlier potty training of children
 - e. a decrease in the price of disposable diapers

TACKLE THE AP[®] TEST: Free-Response Questions

1. Create a table with two hypothetical prices for a good and two corresponding quantities demanded. Choose the prices and quantities so that they illustrate the law of demand. Using your data, draw a correctly labeled graph showing the demand curve for the good. Using the same graph, illustrate an increase in demand for the good.
2. Draw a correctly labeled graph showing the demand for apples. On your graph, illustrate what happens to the demand for apples if a new report from the Surgeon General finds that an apple a day really *does* keep the doctor away. (3 points)

Rubric for FRQ 1 (6 points)



- 1 point:** Table with data labeled “Price” (or “P”) and “Quantity” (or “Q”)
- 1 point:** Values in the table show a negative relationship between P and Q
- 1 point:** Graph with “Price” on the vertical axis and “Quantity” on the horizontal axis
- 1 point:** Negatively-sloped curve labeled “Demand” or “D”
- 1 point:** Demand curve correctly plots the data from the table
- 1 point:** A second demand curve (with a label such as D_2) shown to the right of the original demand curve

In this Module, you will learn to:

- Draw a supply curve and interpret its meaning
- Discuss the difference between movements along the supply curve and changes in supply
- List and describe the factors that shift the supply curve

The Supply Curve

Some parts of the world are especially well suited to growing cotton, and the United States is one of those. But even in the United States, some land is better suited to growing cotton than other land. Whether American farmers restrict their cotton-growing to only the most ideal locations or expand it to less suitable land depends on the price they expect to get for their cotton. Moreover, there are many other areas in the world where cotton could be grown—such as Pakistan, Brazil, Turkey, and China. Whether farmers there actually grow cotton depends, again, on the price.

So just as the quantity of cotton that consumers want to buy depends on the price they have to pay, the quantity that producers are willing to produce and sell—the **quantity supplied**—depends on the price they are offered.



Bonnie Taylor Barry/Shutterstock

The **quantity supplied** is the actual amount of a good or service people are willing to sell at some specific price.

A **supply schedule** shows how much of a good or service producers would supply at different prices.

A **supply curve** shows the relationship between the quantity supplied and the price.

The **law of supply** says that, other things being equal, the price and quantity supplied of a good are positively related.

A **change in supply** is a shift of the supply curve, which changes the quantity supplied at any given price.

AP® EXAM TIP

A change in demand does not affect supply (either the supply schedule or the supply curve). However, if a change in demand causes a change in price, it will affect the quantity supplied by causing a movement along the supply curve.

The Supply Schedule and the Supply Curve

The table in **Figure 6.1** shows how the quantity of cotton made available varies with the price—that is, it shows a hypothetical **supply schedule** for cotton.

A supply schedule works the same way as the demand schedule shown in Figure 5.1: in this case, the table shows the number of pounds of cotton farmers are willing to sell at different prices. At a price of \$0.50 per pound, farmers are willing to sell only 8 billion pounds of cotton per year. At \$0.75 per pound, they're willing to sell 9.1 billion pounds. At \$1, they're willing to sell 10 billion pounds, and so on.

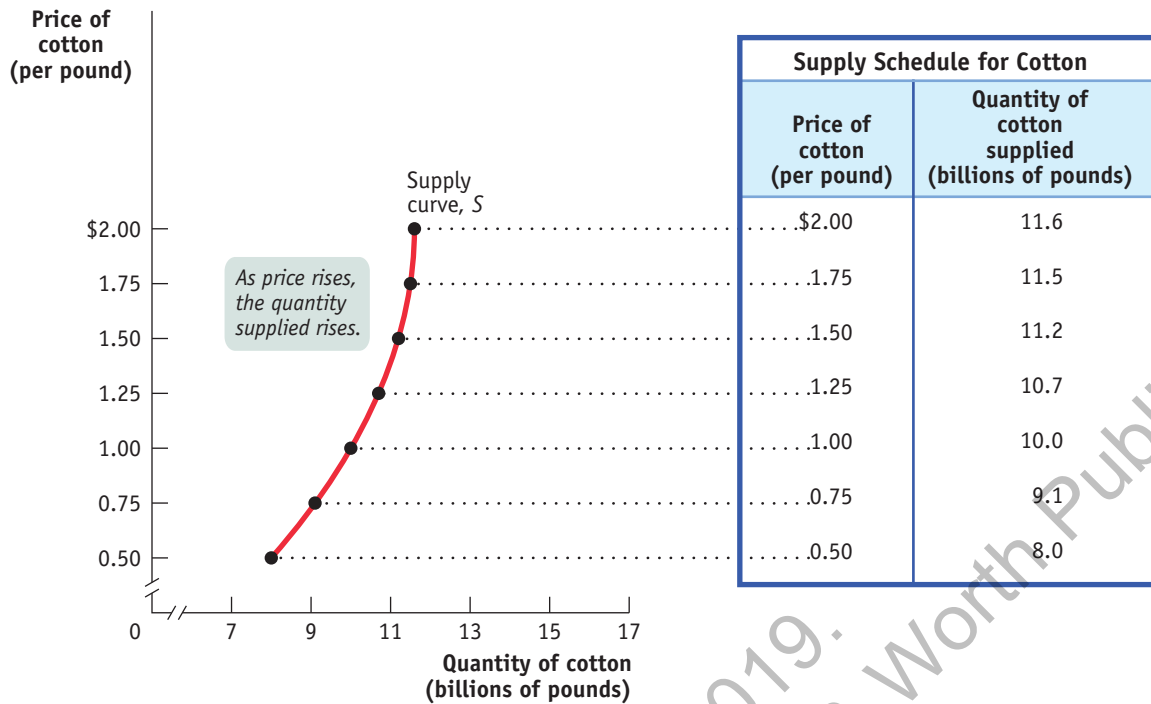
In the same way that a demand schedule can be represented graphically by a demand curve, a supply schedule can be represented by a **supply curve**, as shown in Figure 6.1. Each point on the curve represents an entry from the table.

Suppose that the price of cotton rises from \$1 to \$1.25; we can see that the quantity of cotton farmers are willing to sell rises from 10 billion to 10.7 billion pounds. This is the normal situation for a supply curve: a higher price leads to a higher quantity supplied. Some economists refer to this positive relationship as the **law of supply**. So just as demand curves normally slope downward, supply curves normally slope upward: the higher the price being offered, the more of any good or service producers will be willing to sell.

Shifts of the Supply Curve

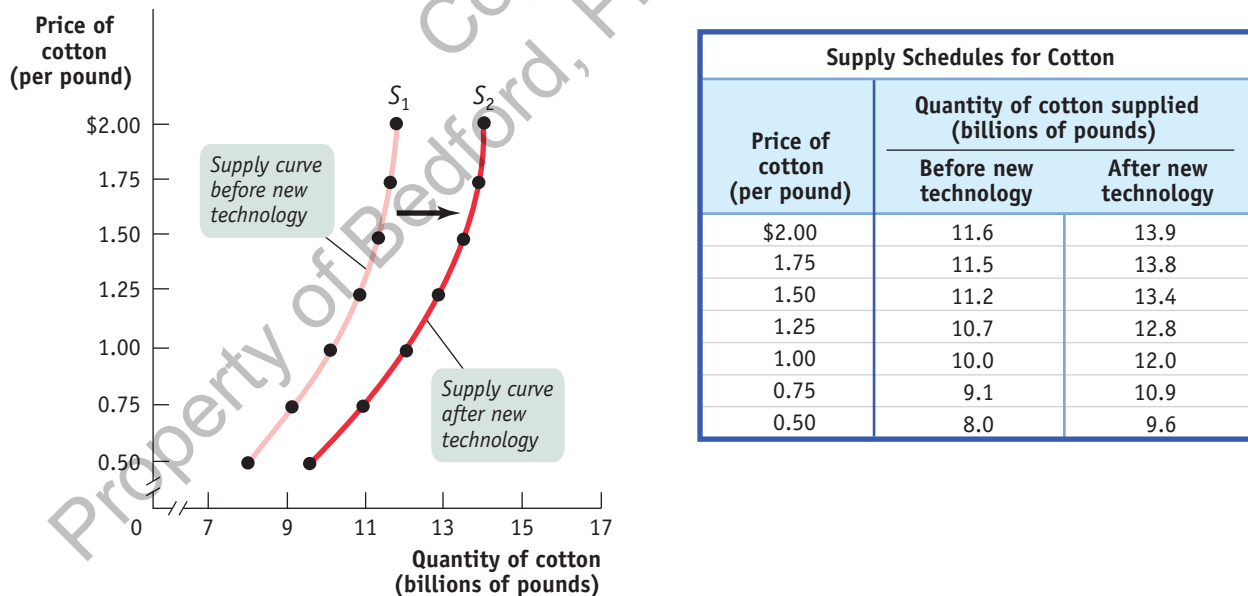
For many decades following World War II, cotton remained relatively cheap. One reason is that the amount of land cultivated for cotton expanded. However, the major factor accounting for cotton's relative cheapness was advances in production technology, with output per acre more than quadrupling during this same period. **Figure 6.2** illustrates these events in terms of the supply schedule and the supply curve for cotton.

The table in Figure 6.2 shows two supply schedules. The schedule before improved cotton-growing technology was adopted is the same one as in Figure 6.1. The second schedule shows the supply of cotton *after* the improved technology was adopted. Just as a change in demand schedules leads to a shift of the demand curve, a change in supply schedules leads to a shift of the supply curve—a **change in supply**. This is shown in Figure 6.2 by the shift of the supply curve before the adoption of new cotton-growing

Figure 6.1 The Supply Schedule and the Supply Curve

The supply schedule for cotton is plotted to yield the corresponding supply curve, which shows how much of a good producers are willing to sell at any given price. The supply curve

and the supply schedule reflect the fact that supply curves are usually upward-sloping: the quantity supplied rises when the price rises.

Figure 6.2 An Increase in Supply

The adoption of improved cotton-growing technology generated an increase in supply—a rise in the quantity supplied at any given price. This event is represented by the two supply schedules—one showing supply before the new technology was adopted, the other

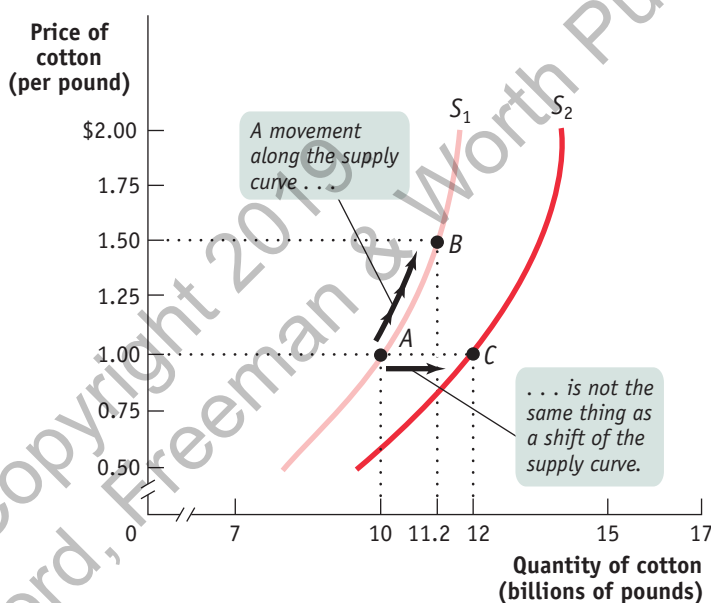
showing supply after the new technology was adopted—and their corresponding supply curves. The increase in supply shifts the supply curve to the right.

technology, S_1 , to its new position after the adoption of new cotton-growing technology, S_2 . Notice that S_2 lies to the right of S_1 , a reflection of the fact that the quantity supplied rises at any given price.

A movement along the supply curve is a change in the quantity supplied of a good arising from a change in the good's price.

As in the analysis of demand, it's crucial to draw a distinction between such changes in supply and **movements along the supply curve**—changes in the quantity supplied arising from a change in price. We can see this difference in **Figure 6.3**. The movement from point A to point B is a movement along the supply curve: the quantity supplied rises along S_1 due to a rise in price. Here, a rise in price from \$1 to \$1.50 leads to a rise in the quantity supplied from 10 billion to 11.2 billion pounds of cotton. But the quantity supplied can also rise when the price is unchanged if there is an increase in supply—a rightward shift of the supply curve. This is shown by the rightward shift of the supply curve from S_1 to S_2 . Holding the price constant at \$1, the quantity supplied rises from 10 billion pounds at point A on S_1 to 12 billion pounds at point C on S_2 .

Figure 6.3 A Movement Along the Supply Curve Versus a Shift of the Supply Curve



The increase in quantity supplied when going from point A to point B reflects a movement along the supply curve: it is the result of a rise in the price of the good. The increase in quantity supplied when going from point A to point C reflects a shift of the supply curve: it is the result of an increase in the quantity supplied at any given price.

AP[®] EXAM TIP

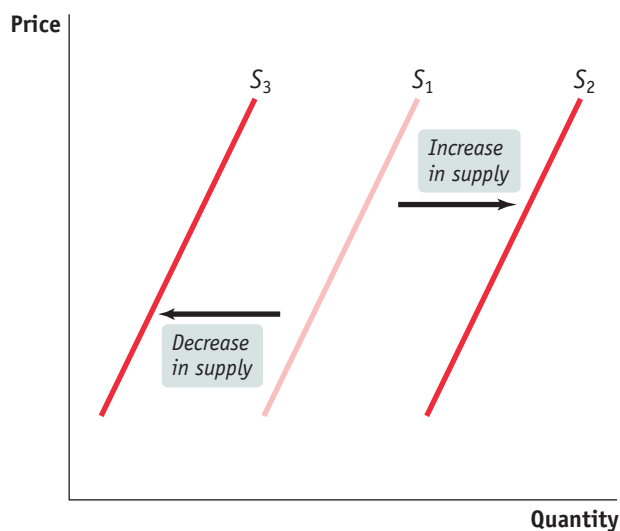
A price change causes a change in the quantity supplied, shown by a movement along the supply curve. When a nonprice determinant of supply changes, this changes supply and therefore shifts the supply curve. It is correct to say that an increase in the price of apples increases the *quantity of apples supplied*; it is incorrect to say that an increase in the price of apples *increases the supply of apples*.

Understanding Shifts of the Supply Curve

Figure 6.4 illustrates the two basic ways in which supply curves can shift. When economists talk about an “increase in supply,” they mean a *rightward* shift of the supply curve: at any given price, producers supply a larger quantity of the good than before. This is shown in Figure 6.4 by the rightward shift of the original supply curve S_1 to S_2 . And when economists talk about a “decrease in supply,” they mean a *leftward* shift of the supply curve: at any given price, producers supply a smaller quantity of the good than before. This is represented by the leftward shift of S_1 to S_3 .

Shifts of the supply curve for a good or service are typically the result of a change in one of five factors (though, as in the case of demand, there are other possible causes):

- input prices
- the prices of related goods or services
- producer expectations
- the number of producers
- technology

Figure 6.4 Shifts of the Supply Curve

Any event that increases supply shifts the supply curve to the right, reflecting a rise in the quantity supplied at any given price. Any event that decreases supply shifts the supply curve to the left, reflecting a fall in the quantity supplied at any given price.

Table 6.1 (on the next page) provides an overview of the factors that shift supply.

Changes in Input Prices To produce output, you need *inputs*. An **input** is any good or service that is used to produce another good or service. For example, to make vanilla ice cream, you need vanilla beans, cream, sugar, and so on. Inputs, like outputs, have prices. And an increase in the price of an input makes the production of the final good more costly for those who produce and sell it. So producers are less willing to supply the final good at any given price, and the supply curve shifts to the left. For example, fuel is a major cost for airlines. When oil prices surged in 2007–2008, airlines began cutting back on their flight schedules and some went out of business. Similarly, a fall in the price of an input makes the production of the final good less costly for sellers. They are more willing to supply the good at any given price, and the supply curve shifts to the right.

An **input** is a good or service that is used to produce another good or service.

Changes in the Prices of Related Goods or Services A single producer often produces a mix of goods rather than a single product. For example, an oil refinery produces gasoline from crude oil, but it also produces heating oil and other products from the same raw material. When a producer sells several products, the quantity of any one good it is willing to supply at any given price depends on the prices of its other co-produced goods.

This effect can run in either direction. An oil refiner will supply less gasoline at any given price when the price of heating oil rises, shifting the supply curve for gasoline to the left. But it will supply more gasoline at any given price when the price of heating oil falls, shifting the supply curve for gasoline to the right. This means that gasoline and other co-produced oil products are *substitutes in production* for refiners.

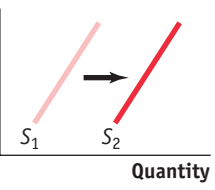
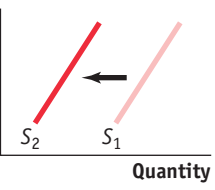
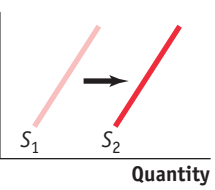
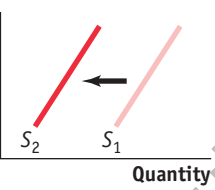
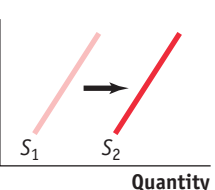
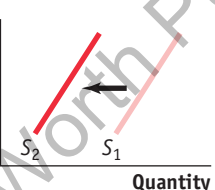
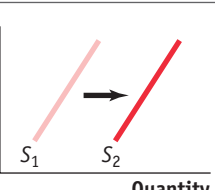
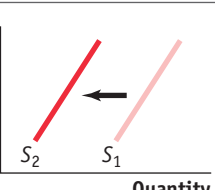
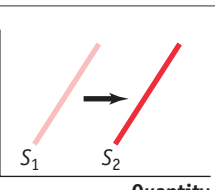
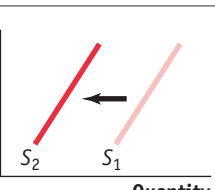
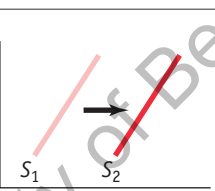
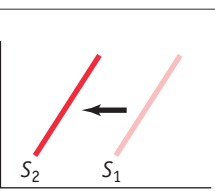
In contrast, due to the nature of the production process, other goods can be *complements in production*. For example, producers of crude oil—oil-well drillers—often find that oil wells also produce natural gas as a by-product of oil extraction. The higher the price at which a driller can sell its natural gas, the more oil wells it will drill and the more oil it will supply at any given price for oil. As a result, natural gas is a complement in production for crude oil.

Changes in Producer Expectations Just as changes in consumer expectations can shift the demand curve, they can also shift the supply curve. When suppliers have some choice about when they put their good up for sale, changes in the expected future price of the good can lead a supplier to supply less or more of the good today.

AP® EXAM TIP

A change in supply is shown by a shift of the curve, indicating a change in the quantity supplied at every price. Remember, “left is less and right is more.” But looks can be deceiving. When supply decreases, the supply curve shifts to the left—which is up, not down. When supply increases, the supply curve shifts to the right—which is down, not up. To avoid confusion, always think “right” and “left” (not “up” and “down”) when shifting supply and demand curves.

Table 6.1 Factors That Shift Supply

When this happens supply increases	But when this happens supply decreases
When the price of an input falls . . .	 . . . supply of the good increases.	When the price of an input rises . . .	 . . . supply of the good decreases.
When the price of a related good or service such as a substitute in production falls . . .	 . . . supply of the original good increases.	When the price of a related good or service such as a substitute in production rises . . .	 . . . supply of the original good decreases.
When the price of a related good such as a complement in production rises . . .	 . . . supply of the original good increases.	When the price of a related good such as a complement in production falls . . .	 . . . supply of the original good decreases.
When the price is expected to fall in the future . . .	 . . . supply of the good increases today.	When the price is expected to rise in the future . . .	 . . . supply of the good decreases today.
When the number of producers rises . . .	 . . . market supply of the good increases.	When the number of producers falls . . .	 . . . market supply of the good decreases.
When the technology used to produce the good improves . . .	 . . . supply of the good increases.	When the best technology used to produce the good is no longer available . . .	 . . . supply of the good decreases.



For example, gasoline and other oil products are often stored for significant periods of time at oil refineries before being sold to consumers. In fact, storage is normally part of producers' business strategy. Knowing that the demand for gasoline peaks in the summer, oil refiners normally reserve some of their gasoline produced during the spring for sale in the summer. Similarly, knowing that the demand for heating oil peaks in the winter, they normally reserve some of their heating oil produced during the fall for sale in the winter. In each case, producers

make a decision of when to sell a given product based on a comparison of the current price versus the expected future price. This example illustrates how changes in expectations can alter supply: an increase in the anticipated future price of a good or service reduces supply today, a leftward shift of the supply curve. Similarly, a fall in the anticipated future price increases supply today, a rightward shift of the supply curve.

Changes in the Number of Producers Just as a change in the number of consumers affects the demand curve, a change in the number of producers affects the supply curve. A market with many producers will supply a larger quantity of a good than a market with a single producer, all other things equal.

Changes in Technology When economists talk about “technology,” they mean all the methods people can use to turn inputs into useful goods and services. In that sense, the whole complex sequence of activities that turn cotton from Pakistan into the pair of jeans hanging in your closet is technology.

Improvements in technology enable producers to spend less on inputs yet still produce the same output. When a better technology becomes available, reducing the cost of production, supply increases, and the supply curve shifts to the right. As we have already mentioned, improved technology enabled farmers to more than quadruple cotton output per acre planted over the past several decades. Improved technology is the main reason that, until recently, cotton remained relatively cheap even as worldwide demand grew.

AP® EXAM TIP

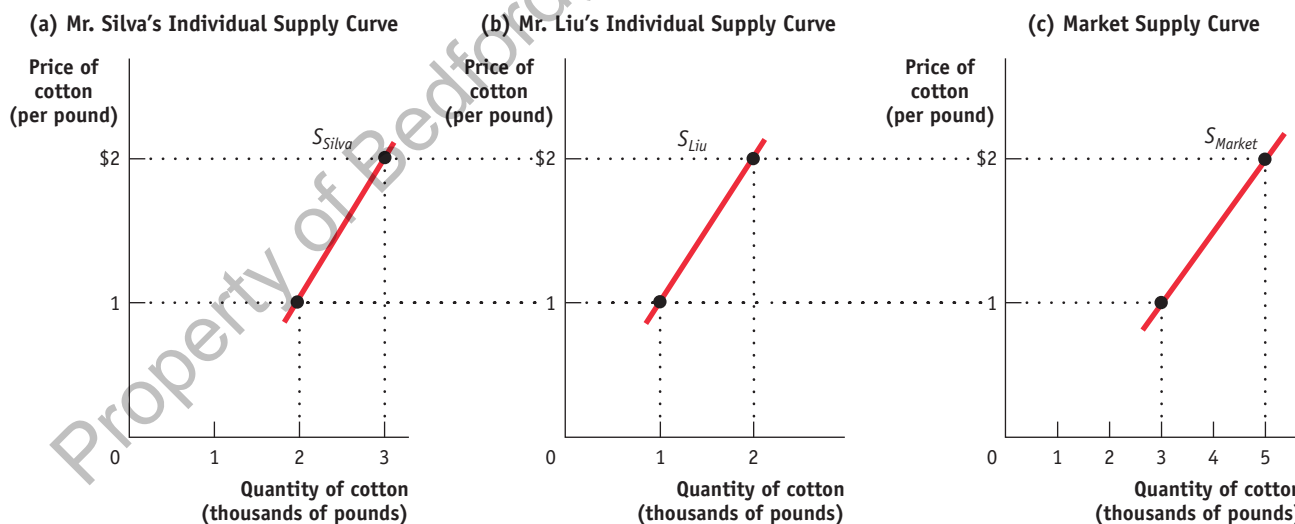
The mnemonic **I-RENT** can help you remember the factors that shift supply. Supply is shifted by changes in . . .
Intermediate (input) resource prices,
Related goods and services, producer
Expectations, the **N**umber of producers, and **T**echnology.

Individual Versus Market Supply Curves

Now that we have introduced the market supply curve, let's examine how it is related to a producer's **individual supply curve**. Look at panel (a) in **Figure 6.5**. The individual supply curve shows the relationship between quantity supplied and price for an individual producer. For example, suppose that Mr. Silva is a Brazilian cotton farmer and that panel (a) of Figure 6.5 shows how many pounds of cotton he will supply per year at any given price. Then S_{Silva} is his individual supply curve.

An **individual supply curve** illustrates the relationship between quantity supplied and price for an individual producer.

Figure 6.5 Individual Supply Curves and the Market Supply Curve



Panel (a) shows the individual supply curve for Mr. Silva, S_{Silva} , the quantity of cotton he will sell at any given price. Panel (b) shows the individual supply curve for Mr. Liu, S_{Liu} . The market supply curve, which shows the quantity of cotton supplied by all

producers at any given price, is shown in panel (c). The market supply curve is the horizontal sum of the individual supply curves of all producers.

The *market supply curve* shows how the combined total quantity supplied by all individual producers in the market depends on the market price of that good. Just as the market demand curve is the horizontal sum of the individual demand curves of all consumers, the market supply curve is the horizontal sum of the individual supply curves of all producers. Assume for a moment that there are only two producers of cotton, Mr. Silva and Mr. Liu, a Chinese cotton farmer. Mr. Liu's individual supply curve is shown in panel (b). Panel (c) shows the market supply curve. At any given price, the quantity supplied to the market is the sum of the quantities supplied by Mr. Silva and Mr. Liu. For example, at a price of \$2 per pound, Mr. Silva supplies 3,000 pounds of cotton per year and Mr. Liu supplies 2,000 pounds per year, making the quantity supplied to the market 5,000 pounds.

Clearly, the quantity supplied to the market at any given price is larger with Mr. Liu present than it would be if Mr. Silva were the only supplier. The quantity supplied at a given price would be even larger if we added a third producer, then a fourth, and so on. So an increase in the number of producers leads to an increase in supply and a rightward shift of the supply curve.

MODULE 6 REVIEW



**Adventures in
AP[®] Economics**

Watch the video: **Supply**

Check Your Understanding

- Explain whether each of the following events represents (i) a change in supply or (ii) a *movement along* the supply curve.
 - During a real estate boom that causes house prices to rise, more homeowners put their houses up for sale.
 - Many strawberry farmers open temporary roadside stands during harvest season, even though prices are usually low at that time.
 - Immediately after the school year begins, fewer young people are available to work. Fast-food chains must raise wages, which represent the price of labor, to attract workers.
 - Many construction workers temporarily move to areas that have suffered hurricane damage, lured by higher wages.
 - Since new technologies have made it possible to build larger cruise ships (which are cheaper to run per passenger), Caribbean cruise lines have offered more cabins, at lower prices, than before.
- After each of the following events, will the supply curve for the good that is mentioned shift to the left, shift to the right, or remain unchanged?
 - The coffee berry borer beetle destroys large quantities of coffee berries.
 - Consumers demand more bike helmets than ever.
 - The number of tea producers increases.
 - The price of leather, an input in wallet production, increases.

TACKLE THE AP[®] TEST: Multiple-Choice Questions

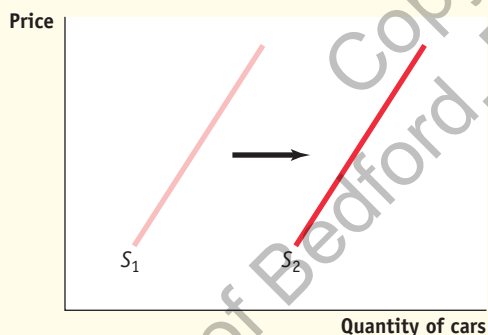
- The law of supply states that the relationship between price and quantity supplied is
 - positive.
 - negative.
 - indirect.
 - unclear.
 - weak.
- Because the market supply curve is the sum of individual producers' supply curves, an increase in the number of producers will cause which of the following?
 - the supply curve to shift to the left
 - the supply curve to shift to the right
 - a movement to the right along the supply curve
 - a movement to the left along the supply curve
 - the supply to decrease
- Which of the following will decrease the supply of rice?
 - There is a technological advance that affects the production of *all* goods.
 - The price of rice falls.
 - The price of corn (which consumers regard as a substitute for rice) decreases.
 - The wages of workers producing rice increase.
 - The demand for rice decreases.

4. An increase in the demand for steak, which increases the price of steak, will lead to an increase in which of the following?
 - a. the supply of steak
 - b. the supply of hamburger (a substitute in production)
 - c. the supply of chicken (a substitute in consumption)
 - d. the supply of leather (a complement in production)
 - e. the demand for leather
5. A technological advance in textbook production will lead to which of the following?
 - a. a decrease in textbook supply
 - b. an increase in textbook demand
 - c. an increase in textbook supply
 - d. a movement along the supply curve for textbooks
 - e. an increase in textbook prices
6. Expectations among hiking-boot makers that boot prices will rise significantly in the future will lead to which of the following now?
 - a. an increase in boot supply
 - b. no change in boot supply
 - c. a decrease in boot supply
 - d. a movement to the left along the boot supply curve
 - e. a movement to the right along the boot supply curve
7. Starch from the stalks of potato plants is used to make packing peanuts, a complement in production. A decrease in potato demand that lowers potato prices will cause which of the following in the packing-peanut market?
 - a. an increase in supply and no change in demand
 - b. an increase in supply and a decrease in demand
 - c. a decrease in both demand and supply
 - d. a decrease in supply and no change in demand
 - e. a decrease in supply and an increase in demand

TACKLE THE AP[®] TEST: Free-Response Questions

1. Tesla Motors makes sports cars powered by lithium batteries.
 - a. Draw a correctly labeled graph showing a hypothetical supply curve for Tesla sports cars.
 - b. On the same graph, show the effect of a major new discovery of lithium that lowers the price of lithium.
 - c. Suppose Tesla Motors expects to be able to sell its cars for a higher price next month. Explain the effect that will have on the supply of Tesla cars this month.
2. Suppose AP[®] economics students at your school offer tutoring services to students in regular economics courses.
 - a. Draw a correctly labeled graph showing the supply curve for tutoring services measured in hours. Label the supply curve “S₁.”
 - b. Suppose the wage paid for babysitting, an alternative activity for AP[®] economics students, increases. Show the effect of this wage increase on the graph you drew for part a. Label the new supply curve “S₂.”
 - c. Suppose instead that the number of AP[®] economics students increases. Show the effect of this increase in AP[®] economics students on the same graph you drew for parts a and b. Label the new supply curve “S₃.”

Rubric for FRQ 1 (4 points)



1 point: Graph with “Price” or “P” on the vertical axis and “Quantity” or “Q” on the horizontal axis

1 point: A positively sloped curve labeled “Supply” or “S”

1 point: A second supply curve shown to the right of the original supply curve with a label such as S_2 , indicating that it is the new supply curve

1 point: Correct explanation that the expectation of higher prices next month would lead to a decrease in the supply of Tesla cars this month because the company will want to sell more of its cars when the price is higher

Supply and Demand: Equilibrium

In this Module, you will learn to:

- Explain how supply and demand curves determine a market's equilibrium price and equilibrium quantity
- Describe how changes in price move the market back to equilibrium in the case of a shortage or surplus
- Explain how equilibrium price and quantity are affected when there is a change in either supply or demand
- Explain how equilibrium price and quantity are affected when there is a simultaneous change in both supply and demand

AP® EXAM TIP

You will hear the term *equilibrium* often in the course, but the idea is not unique to economics. It is used in a variety of situations to indicate *balance* or *no tendency for change*. We will identify equilibrium in different economic models. In the supply and demand model, when a market is in equilibrium, $Q_s = Q_d$, and there is no shortage or surplus, there is no tendency for the price to change.

An economic situation is in **equilibrium** when no individual would be better off doing something different.

A competitive market is in equilibrium when the price has moved to a level at which the quantity demanded of a good equals the quantity supplied of that good. The price at which this takes place is the **equilibrium price**, also referred to as the market-clearing price. The quantity of the good bought and sold at that price is the **equilibrium quantity**.

Supply, Demand, and Equilibrium

We have now covered the first four key elements in the supply and demand model: the demand curve, the supply curve, and the set of factors that shift each curve. The next step is to put these elements together to show how they can be used to predict the price at which the good is bought and sold, as well as the quantity transacted.

In competitive markets the interaction of supply and demand tends to move toward what economists call *equilibrium*. Imagine a busy afternoon at your local supermarket; there are long lines at the checkout counters. Then one of the previously closed registers opens. The first thing that happens is a rush to the newly opened register. But soon enough things settle down and shoppers have rearranged themselves so that the line at the newly opened register is about as long as all the others. This situation—all the checkout lines are now the same length, and none of the shoppers can be better off by doing something different—is what economists call **equilibrium**.

The concept of equilibrium helps us understand the price at which a good or service is bought and sold as well as the quantity transacted of the good or service. A competitive market is in equilibrium when the price has moved to a level at which the quantity of a good demanded equals the quantity of that good supplied. At that price, no individual seller could make herself better off by offering to sell either more or less of the good, and no individual buyer could make himself better off by offering to buy more or less of the good. Recall the shoppers at the supermarket who cannot make themselves better off (cannot save time) by changing lines. Similarly, at the market equilibrium, the price has moved to a level that exactly matches the quantity demanded by consumers to the quantity supplied by sellers.

The price that matches the quantity supplied and the quantity demanded is the **equilibrium price**; the quantity bought and sold at that price is the **equilibrium quantity**. The equilibrium price is also known as the market-clearing price: it is the price that “clears the market” by ensuring that every buyer willing to pay that price finds a seller willing to sell at that price, and vice versa. So how do we find the equilibrium price and quantity?



Orlando Sentinel/Getty Images

Finding the Equilibrium Price and Quantity

The easiest way to determine the equilibrium price and quantity in a market is by putting the supply curve and the demand curve on the same diagram. Since the supply curve shows the quantity supplied at any given price and the demand curve shows the quantity demanded at any given price, the price at which the two curves cross is the equilibrium price: the price at which quantity supplied equals quantity demanded.

Figure 7.1 combines the demand curve from Figure 5.1 and the supply curve from Figure 6.1. They *intersect* at point *E*, which is the equilibrium of this market; \$1 is the equilibrium price and 10 billion pounds is the equilibrium quantity.

Let's confirm that point *E* fits our definition of equilibrium. At a price of \$1 per pound, cotton farmers are willing to sell 10 billion pounds a year and cotton consumers want to buy 10 billion pounds a year. So at the price of \$1 a pound, the quantity of cotton supplied equals the quantity demanded. Notice that at any other price the market would not clear: every willing buyer would not be able to find a willing seller, or vice versa. More specifically, if the price were more than \$1, the quantity supplied would exceed the quantity demanded; if the price were less than \$1, the quantity demanded would exceed the quantity supplied.

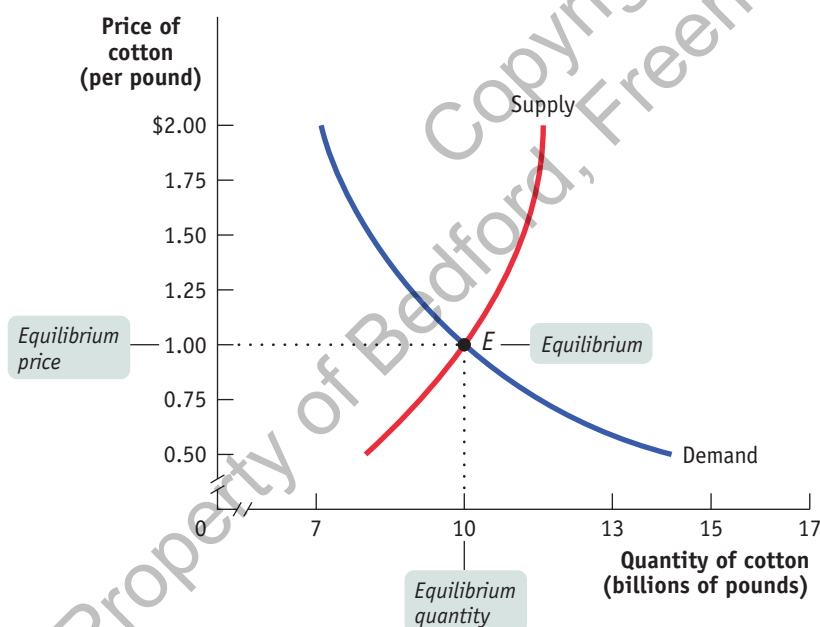
The model of supply and demand, then, predicts that given the demand and supply curves shown in Figure 7.1, 10 billion pounds of cotton would change hands at a price of \$1 per pound. But how can we be sure that the market will arrive at the equilibrium price? We begin by answering three simple questions:

1. Why do all sales and purchases in a market take place at the same price?
2. Why does the market price fall if it is above the equilibrium price?
3. Why does the market price rise if it is below the equilibrium price?

AP[®] EXAM TIP

Equilibrium price is shown on the vertical axis (where price is measured), and equilibrium quantity is shown on the horizontal axis (where quantity is measured). Equilibrium price and quantity are found where the supply and demand curves intersect on the graph, but the values for price and quantity must be shown on the axes. Points labeled inside the graph will not receive points when students are asked to show equilibrium price and quantity on the AP[®] exam.

Figure 7.1 Market Equilibrium



Market equilibrium occurs at point *E*, where the supply curve and the demand curve intersect. In equilibrium, the quantity demanded is equal to the quantity supplied. In this market, the equilibrium price is \$1 per pound and the equilibrium quantity is 10 billion pounds per year.

Why Do All Sales and Purchases in a Market Take Place at the Same Price?

There are some markets where the same good can sell for many different prices, depending on who is selling or who is buying. For example, have you ever bought



a souvenir in a “tourist trap” and then seen the same item on sale somewhere else (perhaps even in the shop next door) for a lower price? Because tourists don’t know which shops offer the best deals and don’t have time for comparison shopping, sellers in tourist areas can charge different prices for the same good.

But in any market in which the buyers and sellers have both been around for some time, sales and purchases tend to converge at a generally uniform price, so we can safely talk about *the* market price. It’s easy to see why. Suppose a seller offered a potential buyer a price noticeably above what the buyer knew other people were paying. The buyer would clearly be better off shopping elsewhere—unless the seller were prepared to offer a better deal. Conversely, a seller would not be willing to sell for significantly less than the amount he knew most buyers were paying; he would be better off waiting to get a more reasonable customer. So in any well-established,

ongoing market, all sellers receive and all buyers pay approximately the same price. This is what we call the *market price*.

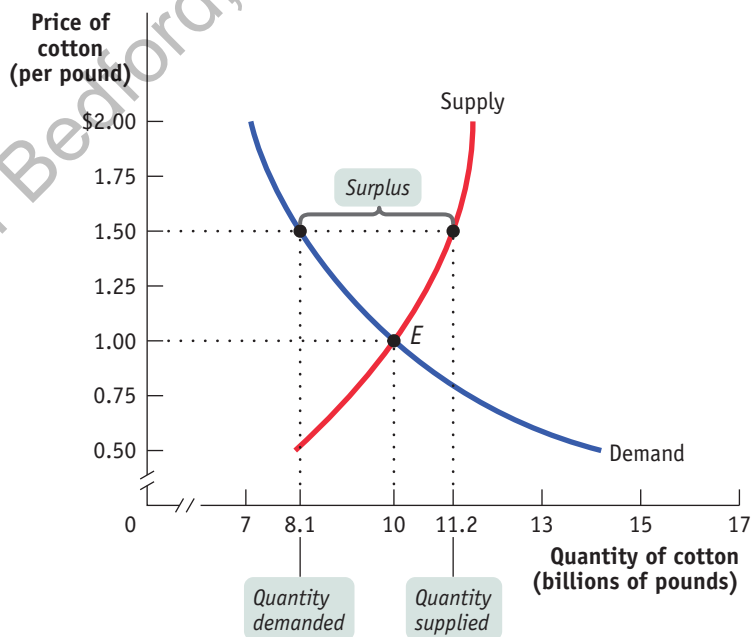
Why Does the Market Price Fall If It Is Above the Equilibrium Price?

There is a **surplus** of a good or service when the quantity supplied exceeds the quantity demanded. Surpluses occur when the price is above its equilibrium level.

Suppose the supply and demand curves are as shown in Figure 7.1 but the market price is above the equilibrium level of \$1—say, \$1.50. This situation is illustrated in **Figure 7.2**. Why can’t the price stay there?

As the figure shows, at a price of \$1.50 there would be more pounds of cotton available than consumers wanted to buy: 11.2 billion pounds versus 8.1 billion pounds. The difference of 3.1 billion pounds is the **surplus**—also known as the *excess supply*—of cotton at \$1.50.

Figure 7.2 Price Above Its Equilibrium Level Creates a Surplus



The market price of \$1.50 is above the equilibrium price of \$1. This creates a surplus: at a price of \$1.50, producers would like to sell 11.2 billion pounds but consumers want to buy only 8.1 billion pounds, so there is a surplus of 3.1 billion pounds. This surplus will push the price down until it reaches the equilibrium price of \$1.

This surplus means that some cotton farmers are frustrated: at the current price, they cannot find consumers who want to buy their cotton. The surplus offers an incentive for those frustrated would-be sellers to offer a lower price in order to poach business from other producers and entice more consumers to buy. The result of this price cutting will be to push the prevailing price down until it reaches the equilibrium price. So the price of a good will fall whenever there is a surplus—that is, whenever the market price is above its equilibrium level.

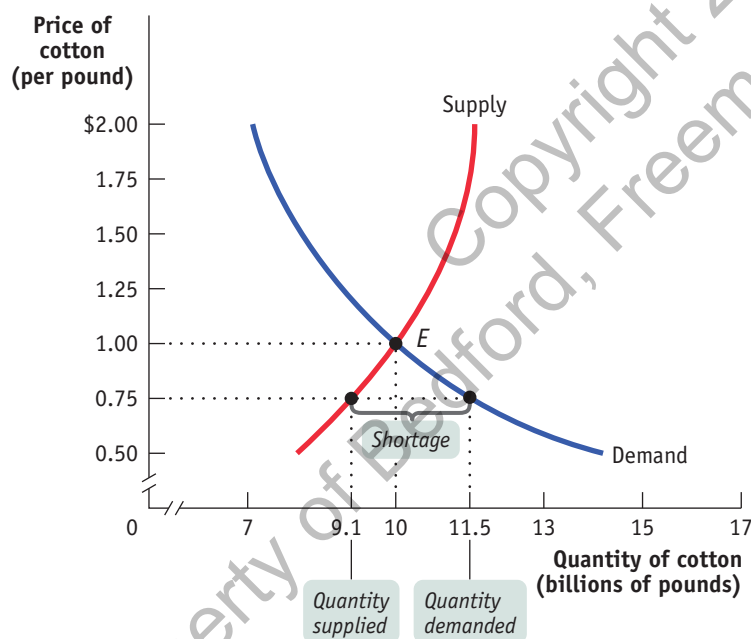
Why Does the Market Price Rise If It Is Below the Equilibrium Price?

Now suppose the price is below its equilibrium level—say, at \$0.75 per pound, as shown in **Figure 7.3**. In this case, the quantity demanded, 11.5 billion pounds, exceeds the quantity supplied, 9.1 billion pounds, implying that there are would-be buyers who cannot find cotton: there is a **shortage**, also known as an *excess demand*, of 2.4 billion pounds.

When there is a shortage, there are frustrated would-be buyers—people who want to purchase cotton but cannot find willing sellers at the current price. In this situation, either buyers will offer more than the prevailing price or sellers will realize that they can charge higher prices. Either way, the result is to drive up the prevailing price. This bidding up of prices happens whenever there are shortages—and there will be shortages whenever the price is below its equilibrium level. So the market price will always rise if it is below the equilibrium level.

There is a **shortage** of a good or service when the quantity demanded exceeds the quantity supplied. Shortages occur when the price is below its equilibrium level.

Figure 7.3 Price Below Its Equilibrium Level Creates a Shortage



The market price of \$0.75 is below the equilibrium price of \$1. This creates a shortage: consumers want to buy 11.5 billion pounds, but only 9.1 billion pounds are for sale, so there is a shortage of 2.4 billion pounds. This shortage will push the price up until it reaches the equilibrium price of \$1.

Using Equilibrium to Describe Markets

We have now seen that a market tends to have a single price, the equilibrium price. If the market price is above the equilibrium level, the ensuing surplus leads buyers and sellers to take actions that lower the price. And if the market price is below the equilibrium level, the ensuing shortage leads buyers and sellers to take actions that raise the price. So the market price always *moves toward* the equilibrium price, the price at which there is neither surplus nor shortage.

Changes in Supply and Demand

The 2010 floods in Pakistan came as a surprise, but the subsequent increase in the price of cotton was no surprise at all. Suddenly there was a decrease in supply: the quantity of cotton available at any given price fell. Predictably, a decrease in supply raises the equilibrium price.

The flooding in Pakistan is an example of an event that shifted the supply curve for a good without having much effect on the demand curve. There are many such events. There are also events that shift the demand curve without shifting the supply curve. For example, a medical report that chocolate is good for you increases the demand for chocolate but does not affect the supply. Events generally shift either the supply curve or the demand curve, but not both; it is therefore useful to ask what happens in each case.

AP® EXAM TIP

A shift of the demand curve changes the equilibrium price, which changes the quantity supplied. A shift of the supply curve also changes the equilibrium price, which changes the quantity demanded. Note that a change in the equilibrium price causes movement *along* the curve that didn't shift. A shift of the demand curve does not cause a shift of the supply curve, and a shift of the supply curve does not cause a shift of the demand curve.

What Happens When the Demand Curve Shifts

Cotton and polyester are substitutes: if the price of polyester rises, the demand for cotton will increase, and if the price of polyester falls, the demand for cotton will decrease. But how does the price of polyester affect the *market equilibrium* for cotton?

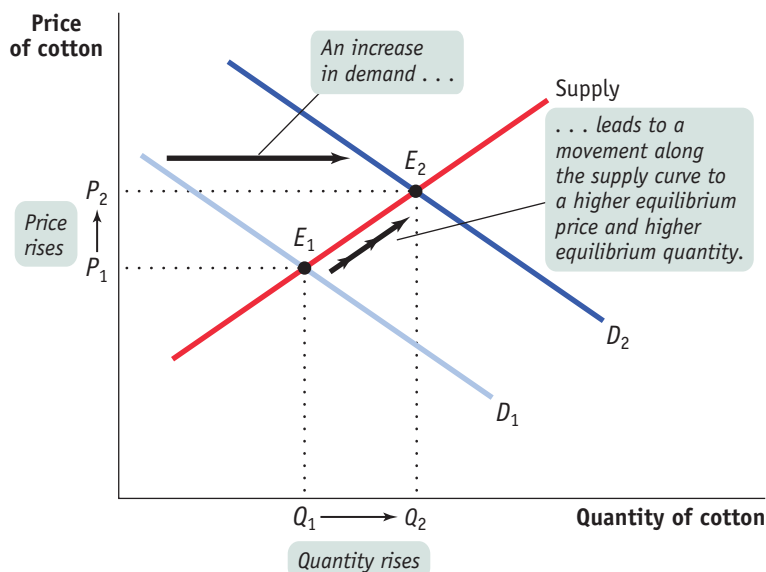
Figure 7.4 shows the effect of a rise in the price of polyester on the market for cotton. The rise in the price of polyester increases the demand for cotton. Point E_1 shows the equilibrium corresponding to the original demand curve, with P_1 the equilibrium price and Q_1 the equilibrium quantity bought and sold.

An increase in demand is indicated by a *rightward* shift of the demand curve from D_1 to D_2 . At the original market price P_1 , this market is no longer in equilibrium: a shortage exists because the quantity demanded exceeds the quantity supplied. So the price of cotton rises and generates an increase in the quantity supplied, an upward *movement along the supply curve*. A new equilibrium is established at point E_2 , with a higher equilibrium price, P_2 , and higher equilibrium quantity, Q_2 . This sequence of events reflects a general principle: *When demand for a good or service increases, the equilibrium price and the equilibrium quantity of the good or service both rise.*

What would happen in the reverse case, a fall in the price of polyester? A fall in the price of polyester reduces the demand for cotton, shifting the demand curve to the *left*. At the original price, a surplus occurs as quantity supplied exceeds quantity demanded. The price falls and

Figure 7.4 Equilibrium and Shifts of the Demand Curve

The original equilibrium in the market for cotton is at E_1 , at the intersection of the supply curve and the original demand curve, D_1 . A rise in the price of polyester, a substitute, shifts the demand curve rightward to D_2 . A shortage exists at the original price, P_1 , causing both the price and quantity supplied to rise, a movement along the supply curve. A new equilibrium is reached at E_2 , with a higher equilibrium price, P_2 , and a higher equilibrium quantity, Q_2 . When demand for a good or service increases, the equilibrium price and the equilibrium quantity of the good or service both rise.



leads to a decrease in the quantity supplied, resulting in a lower equilibrium price and a lower equilibrium quantity. This illustrates another general principle: *When demand for a good or service decreases, the equilibrium price and the equilibrium quantity of the good or service both fall.*

To summarize how a market responds to a change in demand: *An increase in demand leads to a rise in both the equilibrium price and the equilibrium quantity. A decrease in demand leads to a fall in both the equilibrium price and the equilibrium quantity.* That is, a change in demand causes equilibrium price and quantity to move in the same direction.

What Happens When the Supply Curve Shifts

In the real world, it is a bit easier to predict changes in supply than changes in demand. Physical factors that affect supply, such as weather or the availability of inputs, are easier to get a handle on than the fickle tastes that affect demand. Still, with supply as with demand, what we can best predict are the *effects* of shifts of the supply curve.

As we mentioned earlier, devastating floods in Pakistan sharply reduced the supply of cotton in 2010. **Figure 7.5** shows how this shift affected the market equilibrium. The original equilibrium is at E_1 , the point of intersection of the original supply curve, S_1 , and the demand curve, with an equilibrium price P_1 and equilibrium quantity Q_1 . As a result of the bad weather, supply decreases and S_1 shifts *leftward* to S_2 . At the original price P_1 , a shortage of cotton now exists and the market is no longer in equilibrium. The shortage causes a rise in price and a fall in quantity demanded, an upward movement along the demand curve. The new equilibrium is at E_2 , with an equilibrium price P_2 and an equilibrium quantity Q_2 . In the new equilibrium, E_2 , the price is higher and the equilibrium quantity lower than before. This can be stated as a general principle: *When supply of a good or service decreases, the equilibrium price of the good or service rises and the equilibrium quantity of the good or service falls.*

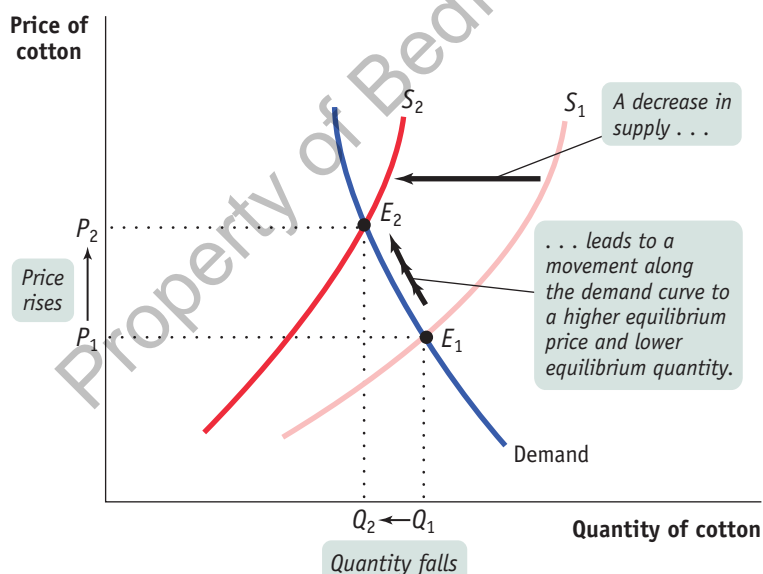
What happens to the market when supply increases? An increase in supply leads to a *rightward* shift of the supply curve. At the original price, a surplus now exists; as a result, the equilibrium price falls and the quantity demanded rises. This describes what happened to the market for cotton as new technology increased cotton yields. We can formulate a general principle: *When supply of a good or service increases, the equilibrium price of the good or service falls and the equilibrium quantity of the good or service rises.*

To summarize how a market responds to a change in supply: *An increase in supply leads to a fall in the equilibrium price and a rise in the equilibrium quantity. A decrease in supply leads to a rise in the equilibrium price and a fall in the equilibrium quantity.* That is, a change in supply causes equilibrium price and quantity to move in opposite directions.

AP[®] EXAM TIP

The graph never lies! To determine what happens to price and quantity when supply or demand shifts, draw the graph of a market in equilibrium and then shift the appropriate curve to show the new equilibrium price and quantity. Compare the old equilibrium price and quantity to the new equilibrium one to find your answer! Draw quick graphs to help you answer multiple choice questions about changes in equilibrium quantity and price.

Figure 7.5 Equilibrium and Shifts of the Supply Curve



The original equilibrium in the market for cotton is at E_1 . Bad weather in cotton-growing areas causes a fall in the supply of cotton and shifts the supply curve leftward from S_1 to S_2 . A new equilibrium is established at E_2 , with a higher equilibrium price, P_2 , and a lower equilibrium quantity, Q_2 .

Simultaneous Shifts of Supply and Demand Curves

Finally, it sometimes happens that simultaneous events shift *both* the demand and supply curves at the same time. This is not unusual; in real life, supply curves and demand curves for many goods and services shift quite often because the economic environment continually changes. **Figure 7.6** illustrates two examples of simultaneous shifts of the supply and demand curves. In both panels there is an increase in demand—that is, a rightward shift of the demand curve, from D_1 to D_2 —for example, representing an increase in the demand for cotton due to changing tastes. Notice that the rightward shift in panel (a) is larger than the one in panel (b): we can suppose that panel (a) represents a year in which many more people than usual choose to buy jeans and cotton T-shirts and panel (b) represents a normal year. Both panels also show a decrease in supply—that is, a leftward shift of the supply curve from S_1 to S_2 . Also notice that the leftward shift in panel (b) is relatively larger than the one in panel (a): we can suppose that panel (b) represents the effect of particularly bad weather in Pakistan and panel (a) represents the effect of a much less severe weather event.

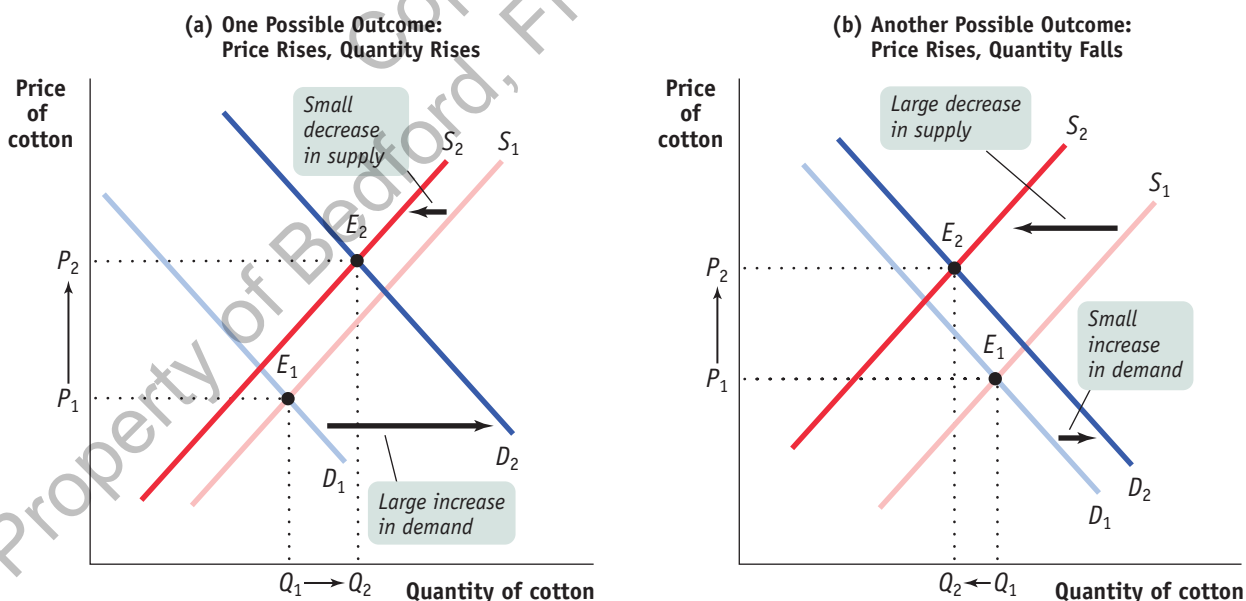
AP[®] EXAM TIP

You can do supply and demand analysis in three easy steps. First, draw the graph before the change. Be sure to label the equilibrium price and quantity on the appropriate axes. Second, identify which curve shifts and add the shift to your graph. Third, label the new equilibrium price and quantity on the appropriate axes and note how each value changed.

In both cases, the equilibrium price rises from P_1 to P_2 as the equilibrium moves from E_1 to E_2 . But what happens to the equilibrium quantity, the quantity of cotton bought and sold? In panel (a) the increase in demand is large relative to the decrease in supply, and the equilibrium quantity rises as a result. In panel (b), the decrease in supply is large relative to the increase in demand, and the equilibrium quantity falls as a result. That is, when demand increases and supply decreases, the actual quantity bought and sold can go either way, depending on *how much* the demand and supply curves have shifted.

In general, when supply and demand shift in opposite directions, we can't predict what the ultimate effect will be on the quantity bought and sold. What we can say is that a curve that shifts a disproportionately greater distance than the other curve will have a disproportionately greater effect on the quantity bought and sold (as we saw in

Figure 7.6 Simultaneous Shifts of the Demand and Supply Curves



In panel (a) there is a simultaneous rightward shift of the demand curve and leftward shift of the supply curve. Here the increase in demand is relatively larger than the decrease in supply, so the equilibrium price and equilibrium quantity both rise. In panel (b)

there is also a simultaneous rightward shift of the demand curve and leftward shift of the supply curve. Here the decrease in supply is relatively larger than the increase in demand, so the equilibrium price rises and the equilibrium quantity falls.

panel (b)). That said, we can make the following prediction about the outcome when the supply and demand curves shift in opposite directions:

- When demand increases and supply decreases, the equilibrium price rises but the change in the equilibrium quantity is ambiguous.
- When demand decreases and supply increases, the equilibrium price falls but the change in the equilibrium quantity is ambiguous.

But suppose that the demand and supply curves shift in the same direction. Before 2010, this was the case in the global market for cotton, where both supply and demand had increased over the past decade. Can we safely make any predictions about the changes in price and quantity? In this situation, the change in quantity bought and sold can be predicted, but the change in price is ambiguous. The two possible outcomes when the supply and demand curves shift in the same direction (which you should check for yourself) are as follows:

- When both demand and supply increase, the equilibrium quantity rises but the change in the equilibrium price is ambiguous.
- When both demand and supply decrease, the equilibrium quantity falls but the change in the equilibrium price is ambiguous.

AP® EXAM TIP

One way to avoid missing the impact of a simultaneous shift is to treat each shift individually and identify the impact on equilibrium. Then identify the common results and the results that are in opposition. If the equilibrium prices for each individual shift are moving in opposite directions, you know that result is ambiguous.

MODULE 7 REVIEW



Adventures in AP® Economics

Watch the video:
Market Equilibrium

Check Your Understanding

- In the following three situations, the market is initially in equilibrium. After each event described below, does a surplus or shortage exist at the original equilibrium price? What will happen to the equilibrium price as a result?
 - In 2018 there was a bumper crop of wine grapes.
 - After a hurricane, Florida hoteliers often find that many people cancel their upcoming vacations, leaving them with empty hotel rooms.
 - After a heavy snowfall, many people want to buy second-hand snowblowers at the local tool shop.
- For each of the following examples, explain how the indicated change affects supply or demand for the good in question and how the shift you describe affects the equilibrium price and quantity.
 - As the price of gasoline fell in the United States during the 1990s, more people bought large cars.
 - Technological innovation in the use of recycled paper has lowered the cost of paper production.
 - When a movie-streaming service lowers its price, local movie theaters have more unfilled seats.
- Periodically, a computer-chip maker such as Intel introduces a new chip that is faster than the previous one. In response, demand for computers using the earlier chip decreases as customers put off purchases in anticipation of machines containing the new chip. Simultaneously, computer makers increase their production of computers containing the earlier chip in order to clear out their stocks of those chips. Draw two diagrams of the market for computers containing the earlier chip: (a) one in which the equilibrium quantity falls in response to these events and (b) one in which the equilibrium quantity rises. What happens to the equilibrium price in each diagram?

TACKLE THE AP® TEST: Multiple-Choice Questions

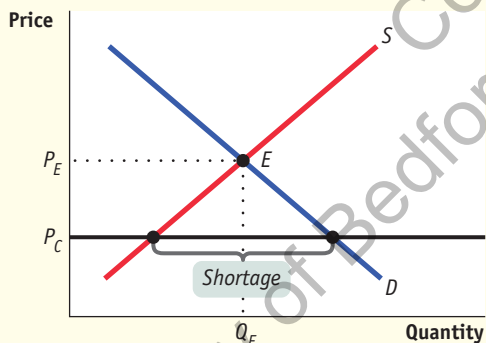
- Which of the following is true about equilibrium?
 - It is a concept used only in economics.
 - Economists use it only in the supply and demand model.
 - It occurs where supply equals demand.
 - It can occur when there is either a shortage or a surplus.
 - It is a point at which there is no tendency for change.
- Price will tend to fall when
 - there is a shortage.
 - quantity demanded is greater than quantity supplied.
 - quantity supplied is less than quantity demanded.
 - price is above equilibrium.
 - price is below equilibrium.
- Which of the following describes what will happen in the market for tomatoes if a salmonella outbreak is attributed to tainted tomatoes?
 - Supply will decrease and price will increase.
 - Supply will decrease and price will decrease.
 - Demand will decrease and price will increase.
 - Demand will decrease and price will decrease.
 - Supply and demand will both decrease.

4. Which of the following will lead to an increase in the equilibrium price of product X? A(n)
 - a. increase in consumer incomes if product X is an inferior good.
 - b. increase in the price of machinery used to produce product X.
 - c. technological advance in the production of good X.
 - d. decrease in the price of good Y (a substitute for good X).
 - e. expectation by consumers that the price of good X is going to fall.
5. The equilibrium price will rise, but the equilibrium quantity may increase, decrease, or stay the same if
 - a. demand increases and supply decreases.
 - b. demand increases and supply increases.
 - c. demand decreases and supply increases.
 - d. demand decreases and supply decreases.
 - e. demand increases and supply does not change.
6. An increase in the number of buyers and a technological advance will cause
 - a. demand to increase and supply to increase.
 - b. demand to increase and supply to decrease.
 - c. demand to decrease and supply to increase.
 - d. demand to decrease and supply to decrease.
 - e. no change in demand and an increase in supply.
7. Which of the following is certainly true if demand and supply increase at the same time?
 - a. The equilibrium price will increase.
 - b. The equilibrium price will decrease.
 - c. The equilibrium quantity will increase.
 - d. The equilibrium quantity will decrease.
 - e. The equilibrium quantity may increase, decrease, or stay the same.

TACKLE THE AP[®] TEST: Free-Response Questions

1. Draw a correctly labeled graph showing the market for tomatoes in equilibrium. Label the equilibrium price " P_E " and the equilibrium quantity " Q_E ." On your graph, draw a horizontal line indicating a price, labeled " P_C ", that would lead to a shortage of tomatoes. Label the size of the shortage on your graph.

Rubric for FRQ 1 (6 points)



1 point: Graph with the vertical axis labeled "Price" or " P " and the horizontal axis labeled "Quantity" or " Q "

1 point: Downward-sloping demand curve labeled "Demand" or " D "

1 point: Upward-sloping supply curve labeled "Supply" or " S "

1 point: Equilibrium price " P_E " labeled on the vertical axis and quantity " Q_E " labeled on the horizontal axis at the intersection of the supply and demand curves

1 point: Price line at a price " P_C " below the equilibrium price

1 point: Correct indication of the shortage, which is the horizontal distance between the quantity demanded and the quantity supplied at the height of P_C

2. Draw a correctly labeled graph showing the market for cups of coffee in equilibrium. On your graph, show the effect of a decrease in the price of coffee beans on the equilibrium price and the equilibrium quantity in the market for cups of coffee. **(5 points)**

Supply and Demand: Price Controls (Ceilings and Floors)

MOD 8

In this Module, you will learn to:

- Explain the workings of price controls, one way government intervenes in markets
- Describe how price controls can create problems and make a market inefficient
- Explain why economists are often deeply skeptical of attempts to intervene in markets
- Identify who benefits and who loses from price controls

Why Governments Control Prices

In Module 7, you learned that a market moves to equilibrium—that is, the market price moves to the level at which the quantity supplied equals the quantity demanded. But this equilibrium price does not necessarily please either buyers or sellers.

After all, buyers would always like to pay less if they could, and sometimes they can make a strong moral or political case that they should pay lower prices. For example, what if the equilibrium between supply and demand for apartments in a major city leads to rental rates that an average working person can't afford? In that case, a government might well be under pressure to impose limits on the rents landlords can charge.

Sellers, however, would always like to get more money for what they sell, and sometimes they can make a strong moral or political case that they should receive higher prices. For example, consider the labor market: the price for an hour of a worker's time is called the *wage rate*. What if the equilibrium in the market for less skilled workers leads to wage rates that yield an income below the poverty level? In that case, a government might well be pressured to require employers to pay a rate no lower than some specified minimum wage.

In other words, there is often a strong political demand for governments to intervene in markets. And powerful interests can make a compelling case that a market intervention favoring them is “fair.” When a government intervenes to regulate prices, we say that it imposes **price controls**. These controls typically take the form of either an upper limit, a **price ceiling**, or a lower limit, a **price floor**.

Unfortunately, it's not easy to tell a market what to do. As we will now see, when a government tries to legislate prices—whether it legislates them *down* by imposing a price ceiling or *up* by imposing a price floor—there are certain predictable and unpleasant side effects.

We make an important assumption in this Module: the markets in question are efficient before price controls are imposed. Markets can sometimes be inefficient, as is the case, for example, in a market dominated by a *monopolist*, a single seller who has the power to influence the market price. When markets are inefficient, price controls potentially move the market closer to efficiency without necessarily causing problems. In practice, however, price controls often *are* imposed on markets that are efficient—like the New York City apartment market. And so the analysis in this Module applies to many important real-world situations.

Price controls are legal restrictions on how high or low a market price may go. They can take two forms: a **price ceiling**, a maximum price sellers are allowed to charge for a good or service, or a **price floor**, a minimum price buyers are required to pay for a good or service.



S. Greg Panosian/Getty Images

Price Ceilings

Aside from rent control, there are not many price ceilings in the United States today. But at times they have been widespread. Price ceilings are typically imposed during crises—wars, harvest failures, natural disasters—because these events often lead to sudden price increases that hurt many people but produce big gains for a lucky few.

The U.S. government imposed ceilings on many prices during World War II: the war sharply increased demand for raw materials, such as aluminum and steel, and price controls prevented those with access to these raw materials from earning huge profits. Price controls on oil were imposed in 1973, when an embargo by Arab oil-exporting countries seemed likely to generate huge profits for U.S. oil companies. Price controls were imposed on California’s wholesale electricity market in 2001, when a shortage created big profits for a few power-generating companies but led to higher electricity bills for consumers.

Believe it or not, rent control in New York is a legacy of World War II: it was imposed because wartime production created an economic boom, which increased demand for apartments at a time when the labor and raw materials that might have been used to build them were being used to win the war instead. Although most price controls were removed soon after the war ended, New York’s rent limits were retained and gradually extended to buildings not previously covered, leading to some very strange situations.

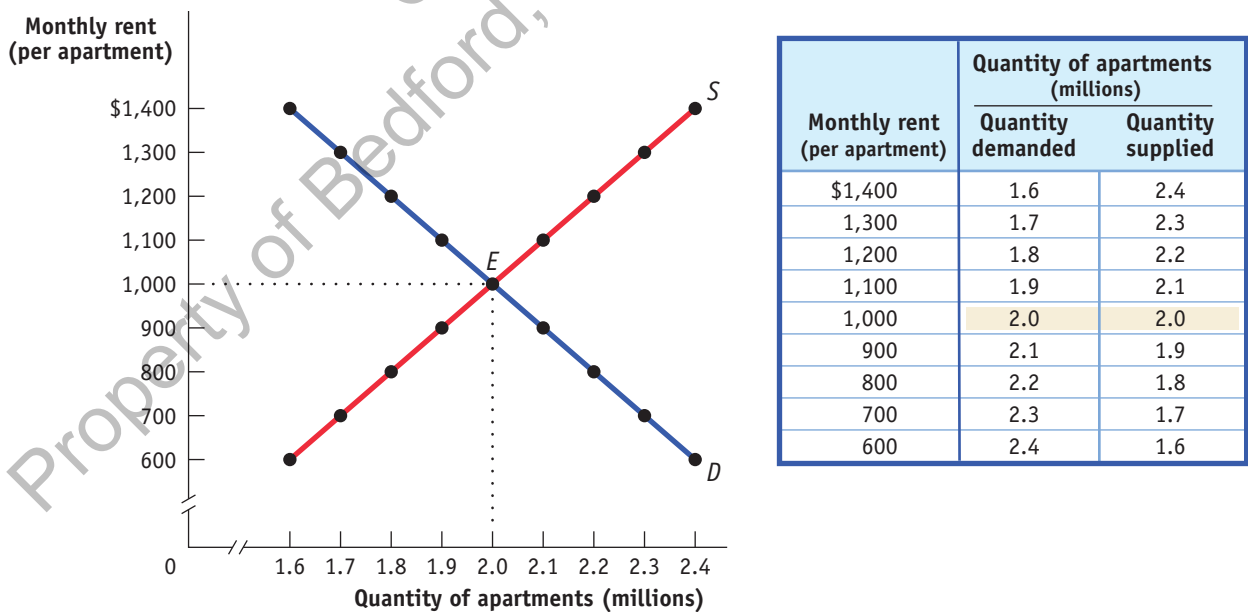
You can rent a one-bedroom apartment in Manhattan on fairly short notice—if you are able and willing to pay several thousand dollars a month or live in a less-than-desirable area. Yet some people pay only a small fraction of this amount for comparable apartments, and others pay only slightly more for bigger apartments in better locations.

Aside from producing great deals for some renters, however, what are the broader consequences of New York’s rent control system? To answer this question, we turn to the supply and demand model.

How Price Ceilings Cause Inefficiencies

To see what can go wrong when a government imposes a price ceiling on an efficient market, consider **Figure 8.1**, which shows a simplified model of the market for apartments in New York. For the sake of simplicity, we imagine that all apartments are exactly the same and so would rent for the same price in an unregulated market. The table in the figure shows the demand and supply schedules; the demand and supply curves are shown on the left. We show the quantity of apartments on the horizontal axis and the monthly rent per apartment on the vertical axis. You can see that in an unregulated

Figure 8.1 The Market for Apartments in the Absence of Government Controls



Without government intervention, the market for apartments reaches equilibrium at point E with a market rent of \$1,000 per month and 2 million apartments rented.

market the equilibrium would be at point *E*: 2 million apartments would be rented for \$1,000 each per month.

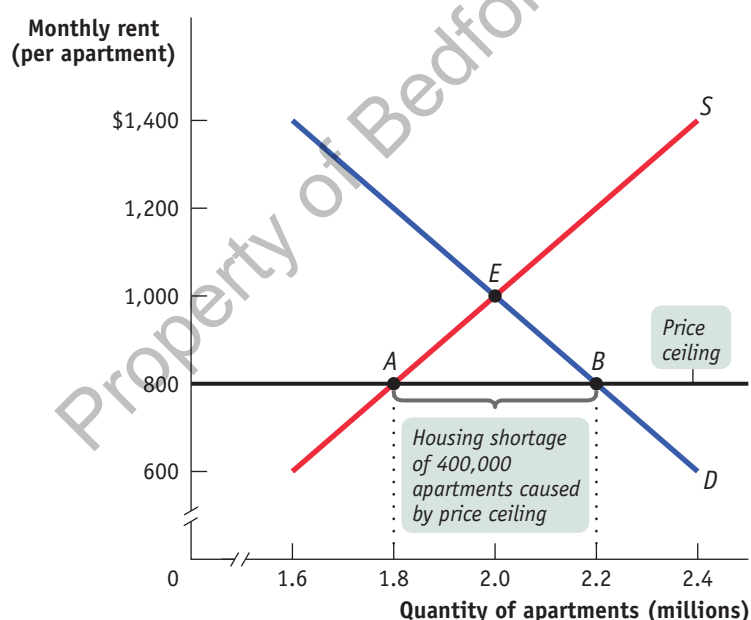
Shortages Now suppose that the government imposes a price ceiling, limiting rents to a price below the equilibrium price—say, no more than \$800. **Figure 8.2** shows the effect of the price ceiling, represented by the line at \$800. At the enforced rental rate of \$800, landlords have less incentive to offer apartments, so they won't be willing to supply as many as they would at the equilibrium rate of \$1,000. They will choose point *A* on the supply curve, offering only 1.8 million apartments for rent, 200,000 fewer than in the unregulated market. At the same time, more people will want to rent apartments at a price of \$800 than at the equilibrium price of \$1,000; as shown at point *B* on the demand curve, at a monthly rent of \$800 the quantity of apartments demanded rises to 2.2 million, 200,000 more than in the unregulated market and 400,000 more than are actually available at the price of \$800. So there is now a persistent shortage of rental housing: at that price, there are 400,000 more people who want to rent than are able to find apartments.

Do price ceilings always cause shortages? No. If a price ceiling is set above the equilibrium price, it won't have any effect. Suppose that the equilibrium rental rate on apartments is \$1,000 per month and the city government sets a ceiling of \$1,200. Who cares? In this case, the price ceiling won't be binding—it won't actually constrain market behavior—and it will have no effect.

Inefficient Allocation to Consumers Rent control doesn't just lead to a shortage in available apartments. It can also lead to misallocation of the apartments that are available: people who urgently need a place to live may not be able to find an apartment, while some apartments may be occupied by people with much less urgent needs.

In the case shown in Figure 8.2, 2.2 million people would like to rent an apartment at \$800 per month, but only 1.8 million apartments are available. Of those 2.2 million who are seeking an apartment, some want an apartment badly and are willing to pay a high price to get one. Others have a less urgent need and are only willing to pay a low price, perhaps because they have alternative housing. An efficient allocation of apartments would reflect these differences: people who really want an apartment will get one and people who aren't all that eager to find an apartment won't. In an inefficient distribution of apartments, the opposite will happen: some people who are not especially

Figure 8.2 The Effects of a Price Ceiling



The black horizontal line represents the government-imposed price ceiling on rents of \$800 per month. This price ceiling reduces the quantity of apartments supplied to 1.8 million, point *A*, and increases the quantity demanded to 2.2 million, point *B*. This creates a persistent shortage of 400,000 units: 400,000 of the people who want apartments at the legal rent of \$800 cannot get them.

Price ceilings often lead to inefficiency in the form of **inefficient allocation to consumers**: people who want the good badly and are willing to pay a high price don't get it, and those who care relatively little about the good and are only willing to pay a relatively low price do get it.

eager to find an apartment will get one and others who are very eager to find an apartment won't. Because people usually get apartments through luck or personal connections under rent control, rent control generally results in an **inefficient allocation to consumers** of the few apartments available.

To see the inefficiency involved, consider the plight of the Lees, a family with young children who have no alternative housing and would be willing to pay up to \$1,500 for an apartment—but are unable to find one. Also consider George, a retiree who lives most of the year in Florida but still has a lease on the New York apartment he moved into 40 years ago. George pays \$800 per month for this apartment, but if the rent were even slightly more—say, \$850—he would give it up and stay with his children when he is in New York.

This allocation of apartments—George has one and the Lees do not—is a missed opportunity: there is a way to make the Lees and George both better off at no additional cost. The Lees would be happy to pay George, say, \$1,200 a month to sublease his apartment, which he would happily accept since the apartment is worth no more than \$849 a month to him. George would prefer the money he gets from the Lees to keeping his apartment; the Lees would prefer to have the apartment rather than the money. So both would be made better off by this transaction—and nobody else would be made worse off.

Generally, if people who really want apartments could sublease them from people who are less eager to live there, both those who gain apartments and those who trade their occupancy for money would be better off. However, subleasing is illegal under rent control because it would occur at prices above the price ceiling. The fact that subletting is illegal doesn't mean it never happens. In fact, chasing down illegal subletting is a major business for New York private investigators. A report in the *New York Times* described how private investigators use hidden cameras and other tricks to prove that the legal tenants in rent-controlled apartments actually live in the suburbs, or even in other states, and have subleased their apartments at two or three times the controlled rent. Subleasing is a kind of black market activity, which we will discuss shortly. For now, just notice that the aggressive pursuit of illegal subletting surely discourages the practice, so there isn't enough subletting to eliminate the inefficient allocation of apartments.

Price ceilings typically lead to inefficiency in the form of **wasted resources**: people expend money, effort, and time to cope with the shortages caused by the price ceiling.

Wasted Resources Another reason a price ceiling causes inefficiency is that it leads to **wasted resources**: people expend money, effort, and time to cope with the shortages caused by the price ceiling. Back in 1979, U.S. price controls on gasoline led to shortages that forced millions of Americans to spend hours each week waiting in lines at gas stations. The opportunity cost of the time spent in gas lines—the wages not earned, the leisure time not enjoyed—constituted wasted resources from the point of view of consumers and of the economy as a whole. Similarly, because of rent control, the Lees will spend all their spare time for several months searching for an apartment, time they would rather have spent working or engaged in family activities. That is, there is an opportunity cost to the Lees' prolonged search for an apartment—the leisure or income they had to forgo. If the market for apartments worked freely, the Lees would quickly find an apartment at the equilibrium rent of \$1,000, leaving them time to earn more or to enjoy themselves—an outcome that would make them better off without making anyone else worse off. Again, rent control creates missed opportunities.

Price ceilings often lead to inefficiency in that the goods being offered are of **inefficiently low quality**: sellers offer low-quality goods at a low price even though buyers would prefer a higher quality at a higher price.

Inefficiently Low Quality Yet another way a price ceiling causes inefficiency is by causing goods to be of inefficiently low quality. **Inefficiently low quality** means that sellers offer low-quality goods at a low price even though buyers would rather have higher quality and are willing to pay a higher price for it.

Again, consider rent control. Landlords have no incentive to provide better conditions because they cannot raise rents to cover their repair costs and they can easily find tenants to rent the apartment as is. In many cases, tenants would be willing to pay much more for improved conditions than it would cost for the landlord to provide them—for example, the upgrade of an antiquated electrical system that cannot safely run air conditioners or computers. But any additional payment for such improvements

would be legally considered a rent increase, which is prohibited. Indeed, rent-controlled apartments are notoriously badly maintained, rarely painted, subject to frequent electrical and plumbing problems, and sometimes even hazardous to inhabit. As one former manager of Manhattan buildings explained, “At unregulated apartments we’d do most things that the tenants requested. But on the rent-regulated units, we did absolutely only what the law required. . . . We had a perverse incentive to make those tenants unhappy. With regulated apartments, the ultimate objective is to get people out of the building [because rents can be raised for new tenants].”

This whole situation is a missed opportunity—some tenants would be happy to pay for better conditions, and landlords would be happy to provide them for payment. But such an exchange would occur only if the market were allowed to operate freely.

Black Markets And that leads us to a last aspect of price ceilings: the incentive they provide for illegal activities, specifically the emergence of **black markets**. We have already described one kind of black market activity—illegal subletting by tenants. But it does not stop there. Clearly, there is a temptation for a landlord to say to a potential tenant, “Look, you can have this place if you slip me an extra few hundred in cash each month”—and for the tenant to agree, if he or she is one of those people who would be willing to pay much more than the maximum legal rent.

What’s wrong with black markets? In general, it’s a bad thing if people break *any* law because it encourages disrespect for the law in general. Worse yet, in this case illegal activity worsens the position of those who try to be honest. If the Lees are scrupulous about upholding the rent control law but other people—who may need an apartment less than the Lees—are willing to bribe landlords, the Lees may *never* find an apartment.

So Why Are There Price Ceilings?

We have seen three common results of price ceilings:

- a persistent shortage of the good;
- inefficiency arising from this persistent shortage in the form of inefficiently low quantity, inefficient allocation of the good to consumers, resources wasted in searching for the good, and the inefficiently low quality of the good offered for sale; and
- the emergence of illegal, black market activity.

Given these unpleasant consequences, why do governments still sometimes impose price ceilings? Why does rent control, in particular, persist in New York City?

One answer is that although price ceilings may have adverse effects, they do benefit some people. In practice, New York’s rent control rules—which are more complex than our simple model—hurt most residents but give a small minority of renters much cheaper housing than they would get in an unregulated market. And those who benefit from the controls may be better organized and more vocal than those who are harmed by them.

Also, when price ceilings have been in effect for a long time, buyers may not have a realistic idea of what would happen without them. In our previous example, the rental rate in an unregulated market (Figure 8.1) would be only 25% higher than in the regulated market (Figure 8.2): \$1,000 instead of \$800. But how would renters know that? Indeed, they might have heard about black market transactions at much higher prices—the Lees or some other family paying George \$1,200 or more—and would not realize that these black market prices are much higher than the price that would prevail in a fully unregulated market.

A last answer is that government officials often do not understand supply and demand analysis! It is a great mistake to suppose that economic policies in the real world are always sensible or well informed.



Signs advertising apartments to rent or sublet are common in New York City.

Chinatown/Alamy

A **black market** is a market in which goods or services are bought and sold illegally—either because it is illegal to sell them at all or because the prices charged are legally prohibited by a price ceiling.

AP® EXAM TIP

When it comes to price controls, the ceiling is down low and the floor is up high. That is, to have any effect, a price ceiling must be below the equilibrium price, and a price floor must be above the equilibrium price.

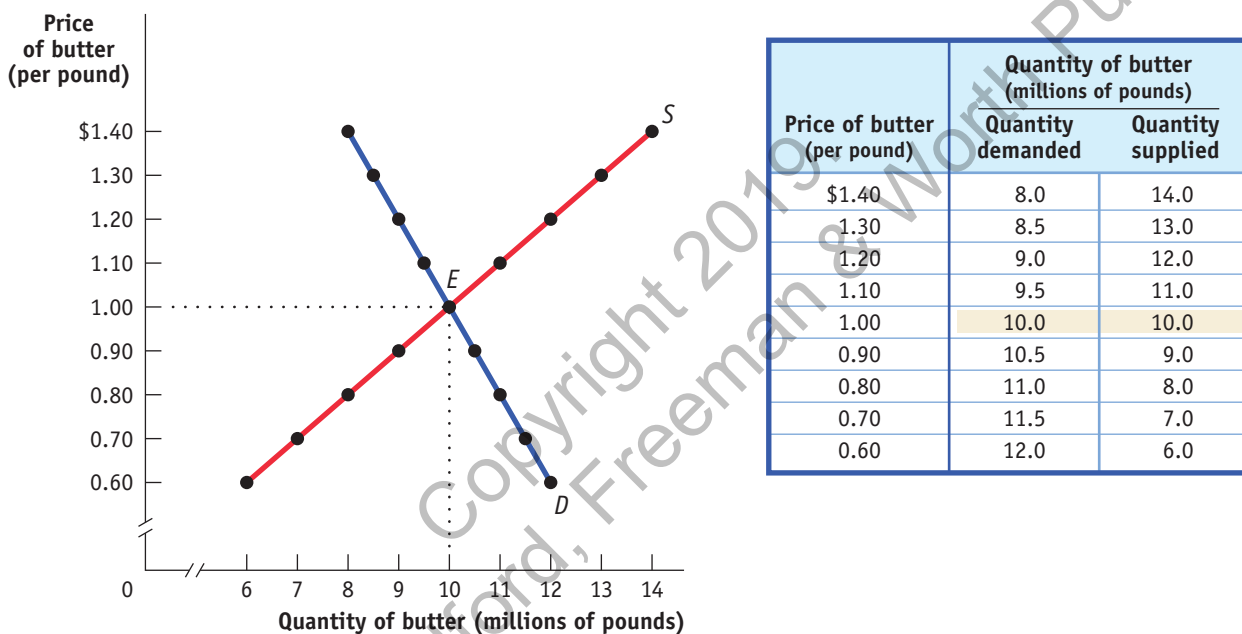
Price Floors

Sometimes governments intervene to push market prices up instead of down. *Price floors* have been widely legislated for agricultural products, such as wheat and milk, as a way to support the incomes of farmers. Historically, there were also price floors on services such as trucking and air travel, although these were phased out by the U.S. government in the 1970s. If you have ever worked in a fast-food restaurant, you are likely to have encountered a price floor: governments in many countries, including the United States, maintain a lower limit on the hourly wage rate paid for a worker's labor—that is, a floor on the price of labor—called the **minimum wage**.

The **minimum wage** is a legal floor on the hourly wage rate paid for a worker's labor.

Just like price ceilings, price floors are intended to help some people but generate predictable and undesirable side effects. **Figure 8.3** shows hypothetical supply and demand curves for butter. Left to itself, the market would move to equilibrium at point *E*, with 10 million pounds of butter bought and sold at a price of \$1 per pound.

Figure 8.3 The Market for Butter in the Absence of Government Controls



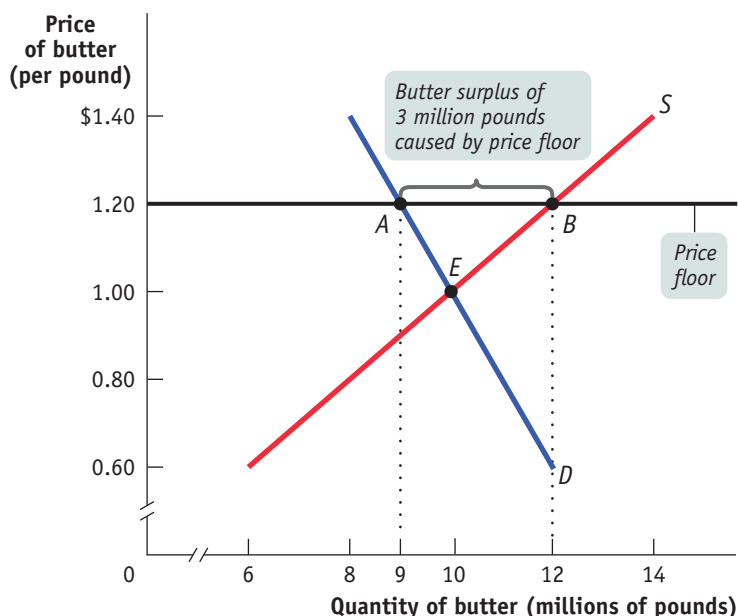
Without government intervention, the market for butter reaches equilibrium at a price of \$1 per pound

with 10 million pounds of butter bought and sold.

Now suppose that the government, in order to help dairy farmers, imposes a price floor on butter of \$1.20 per pound. Its effects are shown in **Figure 8.4**, where the line at \$1.20 represents the price floor. At a price of \$1.20 per pound, producers would want to supply 12 million pounds (point *B* on the supply curve) but consumers would want to buy only 9 million pounds (point *A* on the demand curve). So the price floor leads to a persistent surplus of 3 million pounds of butter.

Does a price floor always lead to an unwanted surplus? No. Just as in the case of a price ceiling, the floor may not be binding—that is, it may be irrelevant. If the equilibrium price of butter is \$1 per pound but the floor is set at only \$0.80, the floor has no effect.

But suppose that a price floor *is* binding: what happens to the unwanted surplus? The answer depends on government policy. In the case of agricultural price floors, governments buy up unwanted surplus. For example, the U.S. government has at times found itself warehousing thousands of tons of butter, cheese, and other farm products.

Figure 8.4 The Effects of a Price Floor

The dark horizontal line represents the government-imposed price floor of \$1.20 per pound of butter. The quantity of butter demanded falls to 9 million pounds, and the quantity supplied rises to 12 million pounds, generating a persistent surplus of 3 million pounds of butter.

(The European Commission, which administers price floors for a number of European countries, once found itself the owner of a so-called butter mountain, equal in weight to the entire population of Austria.) The government then has to find a way to dispose of these unwanted goods.

Some countries pay exporters to sell products at a loss overseas; this is standard procedure for the European Union. The United States gives surplus food away to schools, which use the products in school lunches. In some cases, governments have actually destroyed the surplus production. To avoid the problem of dealing with the unwanted surplus, the U.S. government typically pays farmers not to produce the products at all.

When the government is not prepared to purchase the unwanted surplus, a price floor means that would-be sellers cannot find buyers. This is what happens when there is a price floor on the wage rate paid for an hour of labor, the *minimum wage*: when the minimum wage is above the equilibrium wage rate, some people who are willing to work—that is, sell labor—cannot find employers who want to hire them—that is, buy labor. The result is *unemployment*—a surplus of workers in the market.

How a Price Floor Causes Inefficiency

The persistent surplus that results from a price floor creates missed opportunities—inefficiencies—that resemble those created by the shortage that results from a price ceiling.

Inefficiently Low Quantity Because a price floor raises the price of a good to consumers, it reduces the quantity of that good demanded; because sellers can't sell more units of a good than buyers are willing to buy, a price floor reduces the quantity of a good bought and sold below the market equilibrium quantity. Notice that this is the *same* effect as a price ceiling. You might be tempted to think that a price floor and a price ceiling have opposite effects, but both have the effect of reducing the quantity of a good bought and sold.

Inefficient Allocation of Sales Among Sellers Like a price ceiling, a price floor can lead to *inefficient allocation*—but in this case **inefficient allocation of sales among sellers** rather than inefficient allocation to consumers.

Price floors lead to **inefficient allocation of sales among sellers**: those who would be willing to sell the good at the lowest price are not always those who manage to sell it.

Suppose you would be willing to sell your English tutoring services for \$5 per hour, but the minimum wage is \$9 per hour. Because you are forced to compete with someone who would tutor for no less than \$9 per hour, you risk losing the job to this competitor. In this case, the price floor on wages prevents the worker who would sell tutoring services for the lowest amount from being able to do so.

Wasted Resources Also like a price ceiling, a price floor generates inefficiency by *wasting resources*. The most graphic examples involve government purchases of the unwanted surpluses of agricultural products caused by price floors. When the surplus production is simply destroyed, and when the stored produce goes, as officials euphemistically put it, “out of condition” and must be thrown away, it is pure waste.

Price floors also lead to wasted time and effort. Consider the minimum wage. Would-be workers who spend many hours searching for jobs, or waiting in line in the hope of getting jobs, play the same role in the case of price floors as hapless families searching for apartments in the case of price ceilings.

Inefficiently High Quality Again like price ceilings, price floors lead to inefficiency in the quality of goods produced.

We’ve seen that when there is a price ceiling, suppliers produce goods that are of inefficiently low quality: buyers prefer higher-quality products and are willing to pay for them, but sellers refuse to improve the quality of their products because the price ceiling prevents their being compensated for doing so. This same logic applies to price floors, but in reverse: suppliers offer goods of **inefficiently high quality**.

How can this be? Isn’t high quality a good thing? Yes, but only if it is worth the cost. Suppose that suppliers spend a lot of money to make goods of very high quality but that this level of quality isn’t worth much to consumers, who would rather receive the money spent on that quality in the form of a lower price. This represents a missed opportunity: suppliers and buyers could make a mutually beneficial deal in which buyers got goods of lower quality for a much lower price.

A good example of the inefficiency of high quality comes from the days when transatlantic airfares were set artificially high by international treaty. Forbidden to compete for customers by offering lower ticket prices, airlines instead offered expensive services, like lavish in-flight meals that went largely uneaten. At one point the regulators tried to restrict this practice by defining maximum service standards—for example, that snack service should consist of no more than a sandwich. One airline then introduced what it called a “Scandinavian Sandwich,” a towering affair that forced regulators to convene another conference to define *sandwich*. All of this was wasteful, especially considering that what passengers really wanted was less food and lower airfares.

Since the deregulation of U.S. airlines in the 1970s, passengers have experienced a large decrease in ticket prices accompanied by a decrease in the quality of in-flight service—smaller seats, lower-quality food, and so on. Everyone complains about the service—but thanks to lower fares, the number of people flying on U.S. carriers has grown several hundred percent since airline deregulation.

Illegal Activity Finally, like price ceilings, price floors provide incentives for illegal activity. For example, in countries where the minimum wage is far above the equilibrium wage rate, workers desperate for jobs sometimes agree to work off the books for employers who conceal their employment from the government—or bribe the government inspectors. This practice, known in Europe as “black labor,” is especially common in southern European countries such as Italy and Spain.

Price floors often lead to inefficiency in that goods of **inefficiently high quality** are offered: sellers offer high-quality goods at a high price, even though buyers would prefer a lower quality at a lower price.



Marg Kaselec/Alamy

So Why Are There Price Floors?

To sum up, a price floor creates various negative side effects:

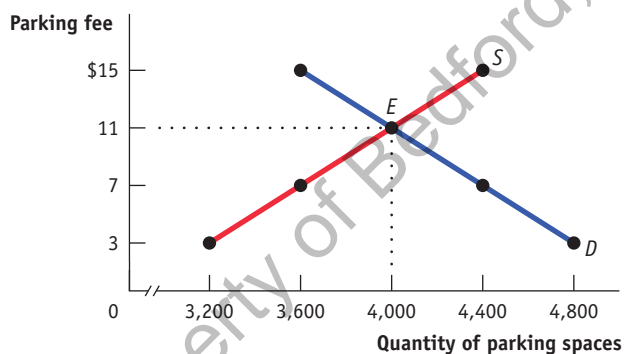
- a persistent surplus of the good;
- inefficiency arising from the persistent surplus in the form of inefficiently low quantity, inefficient allocation of sales among sellers, wasted resources, and an inefficiently high level of quality offered by suppliers; and
- the temptation to engage in illegal activity, particularly bribery and corruption of government officials.

So why do governments impose price floors when they have so many negative side effects? The reasons are similar to those for imposing price ceilings. Government officials often disregard warnings about the consequences of price floors either because they believe that the relevant market is poorly described by the supply and demand model or, more often, because they do not understand the model. Above all, just as price ceilings are often imposed because they benefit some influential buyers of a good, price floors are often imposed because they benefit some influential sellers.

MODULE 8 REVIEW

Check Your Understanding

1. On game days, homeowners near Middletown University's stadium used to rent parking spaces in their driveways to fans at a going rate of \$11. A new town ordinance now sets a maximum parking fee of \$7. Use the accompanying supply and demand diagram to show how each of the following can result from the price ceiling.



- a. Some homeowners now think it's not worth the hassle to rent out spaces.
- b. Some fans who used to carpool to the game now drive alone.

- c. Some fans can't find parking and leave without seeing the game.

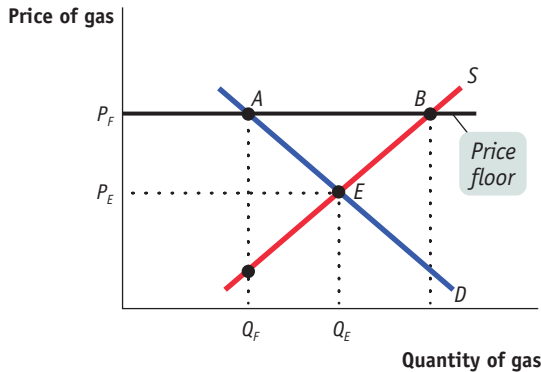
Explain how each of the following adverse effects arises from the price ceiling.

- d. Some fans now arrive several hours early to find parking.
- e. Friends of homeowners near the stadium regularly attend games, even if they aren't big fans. But some serious fans have given up because of the parking situation.
- f. Some homeowners rent spaces for more than \$7 but pretend that the buyers are nonpaying friends or family.

2. True or false? Explain your answer. A price ceiling below the equilibrium price in an otherwise efficient market

- a. increases quantity supplied.
- b. makes some people who want to consume the good worse off.
- c. makes all producers worse off.

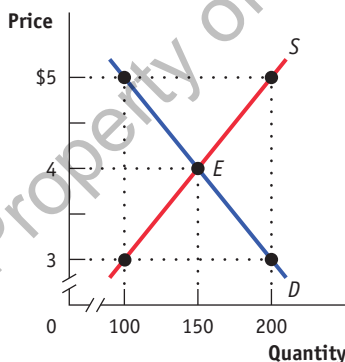
3. The state legislature mandates a price floor for gasoline of P_F per gallon. Assess the following statements and illustrate your answer using the figure provided.



- Proponents of the law claim it will increase the income of gas station owners. Opponents claim it will hurt gas station owners because they will lose customers.
- Proponents claim consumers will be better off because gas stations will provide better service. Opponents claim consumers will be generally worse off because they prefer to buy gas at cheaper prices.
- Proponents claim that they are helping gas station owners without hurting anyone else. Opponents claim that consumers are hurt and will end up doing things like buying gas in a nearby state or on the black market.

TACKLE THE AP® TEST: Multiple-Choice Questions

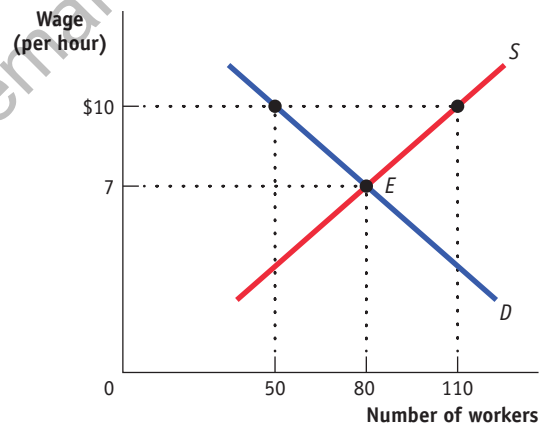
- A price ceiling
 - is an example of a price control.
 - is intended to decrease price below the equilibrium.
 - was established in New York City after World War II.
 - benefits some consumers.
 - is all of the above.
- An effective minimum wage law
 - is an example of a price ceiling.
 - benefits all workers.
 - reduces the quantity of labor supplied.
 - reduces the quantity of labor demanded.
 - is all of the above.
- To be effective, a price ceiling must be set
 - above the equilibrium price.
 - below the equilibrium price.
 - equal to the equilibrium price.
 - by the federal government.
 - on the market for housing.
- Refer to the graph provided. A price floor set at \$5 will result in



- a shortage of 100 units.
- a surplus of 100 units.
- a shortage of 200 units.
- a surplus of 200 units.
- a surplus of 50 units.

- Effective price ceilings are inefficient because they
 - create shortages.
 - lead to wasted resources.
 - decrease quality.
 - create black markets.
 - do all of the above.

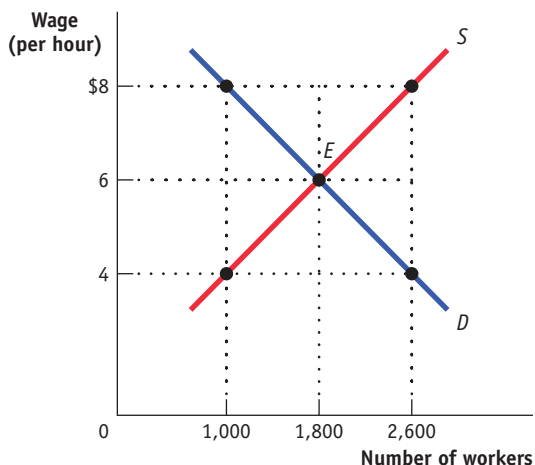
Use the graph provided to answer questions 6 and 7.



- If the government establishes a minimum wage at \$10, how many workers will benefit from the higher wage?
 - 30
 - 50
 - 60
 - 80
 - 110
- With a minimum wage of \$10, how many workers are unemployed (would like to work, but are unable to find a job)?
 - 30
 - 50
 - 60
 - 80
 - 110

TACKLE THE AP[®] TEST: Free-Response Questions

1. Refer to the graph provided to answer the following questions.



- What are the equilibrium wage and quantity of workers in this market?
- For it to have an effect, where would the government have to set a minimum wage?
- If the government set a minimum wage at \$8,
 - how many workers would supply their labor?
 - how many workers would be hired?
 - how many workers would want to work that did not want to work for the equilibrium wage?
 - how many previously employed workers would no longer have a job?

Rubric for FRQ 1 (6 points)

- 1 point:** equilibrium wage = \$6, quantity of labor = 1,800
- 1 point:** The minimum wage will have an effect if it is set anywhere above \$6.
- 1 point:** 2,600 workers would supply their labor
- 1 point:** 1,000 workers would be hired
- 1 point:** 800 (the number of workers who would want to work for \$8 but did not supply labor for \$6)
- 1 point:** 800 (at the equilibrium wage of \$6, 1,800 workers were hired; at a wage of \$8, 1,000 workers would be hired. $1,800 - 1,000 = 800$)

2. Draw a correctly labeled graph of a housing market in equilibrium. On your graph, illustrate an effective legal limit (ceiling) on rent. Identify the quantity of housing demanded, the quantity of housing supplied, and the size of the resulting surplus or shortage.

(6 points)

Supply and Demand: Quantity Controls

In this Module, you will learn to:

- Explain the workings of quantity controls, another way government intervenes in markets
- Describe how quantity controls create problems and can make a market inefficient
- Explain who benefits and who loses from quantity controls

Controlling Quantities



Richard Levine/Alamy

A **quantity control**, or **quota**, is an upper limit on the quantity of some good that can be bought or sold.

A **license** gives its owner the right to supply a good or service.

In the 1930s, New York City instituted a system of licensing for taxicabs: only taxis with a “medallion” were allowed to pick up passengers. Because this system was intended to ensure quality, medallion owners were supposed to maintain certain standards, including safety and cleanliness. A total of 11,787 medallions were issued when this program began, with taxi owners paying \$10 for each medallion.

In 1995, there were still only 11,787 licensed taxicabs in New York, even though the city had meanwhile become the financial capital of the world, a place where hundreds of thousands of people in a hurry tried to hail a cab every day. (An additional 400 medallions were issued in 1995; after several rounds of sales of additional medallions, in 2017 there were approximately 13,587 medallions.) The result of this restriction on the number of taxis was that a New York City taxi medallion became very valuable: if you wanted to operate a taxi in New York, you had to lease a medallion from someone else or buy one for a going price of several hundred thousand dollars. Prices for taxi medallions topped \$1 million at their height, but as we discuss below, innovations in ride sharing in recent years has significantly impacted their value—an unintended consequence of quantity control.

A taxi medallion system is a form of **quantity control**, or **quota**, by which the government regulates the quantity of a good that can be bought and sold rather than regulating the price. Typically, the government limits quantity in a market by issuing **licenses**; only people with a license can legally supply the good. A taxi medallion is just such a license. The government of New York City limits the number of taxi rides that can be sold by limiting the number of taxis to only those who hold medallions. There are many other cases of quantity controls, ranging from limits on how much foreign currency (for instance, British pounds or Mexican pesos) people are allowed to buy to the quantity of clams New Jersey fishing boats are allowed to catch. Section 8 discusses quotas on goods imported from other countries.

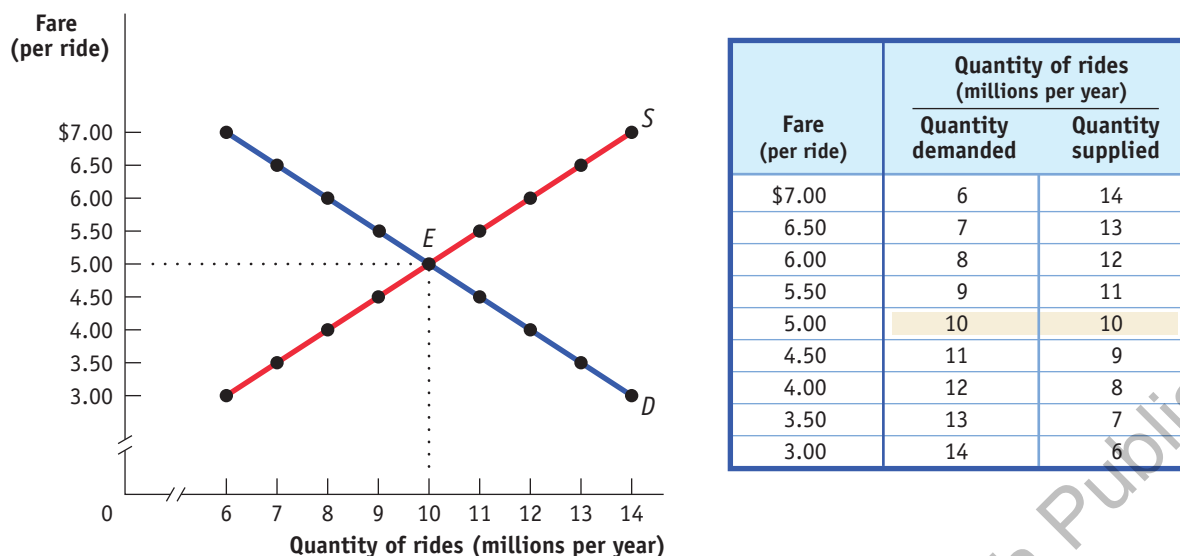
Some attempts to control quantities are undertaken for good economic reasons, some for bad ones. In many cases, as we will see, quantity controls introduced to address a temporary problem become politically hard to remove later because the beneficiaries don’t want them abolished, even after the original reason for their existence is long gone. But whatever the reasons for such controls, they have certain predictable—and usually undesirable—economic consequences.

AP® EXAM TIP

Quantity controls and price controls are graphed differently. Graph a quota as a vertical line at the quantity limit. Graph a price ceiling or floor as a horizontal line at the price limit.

The Anatomy of Quantity Controls

To understand why a New York taxi medallion has value, we consider a simplified version of the market for taxi rides, shown in **Figure 9.1**. Just as we assumed in the analysis of rent control that all apartments were the same, we now suppose that all taxi rides are the same—ignoring the real-world complication that some taxi rides are longer, and therefore more expensive, than others. The table in the figure shows supply and demand schedules. The equilibrium—indicated by point *E*

Figure 9.1 The Market for Taxi Rides in the Absence of Government Controls

Without government intervention, the market reaches equilibrium with 10 million rides taken per year at a fare of \$5 per ride.

in the figure and by the shaded entries in the table—is a fare of \$5 per ride, with 10 million rides taken per year. (You'll see in a minute why we present the equilibrium this way.)

The New York medallion system limits the number of taxis, but each taxi driver can offer as many rides as he or she can manage. (Now you know why New York taxi drivers are so aggressive!) To simplify our analysis, however, we will assume that a medallion system limits the number of taxi rides that can legally be given to 8 million per year.

Until now, we have derived the demand curve by answering questions of the form: "How many taxi rides will passengers want to take if the price is \$5 per ride?" But it is possible to reverse the question and ask instead: "At what price will consumers want to buy 10 million rides per year?" The price at which consumers want to buy a given quantity—in this case, 10 million rides at \$5 per ride—is the **demand price** of that quantity. You can see from the demand schedule in Figure 9.1 that the demand price of 6 million rides is \$7 per ride, the demand price of 7 million rides is \$6.50 per ride, and so on.

Similarly, the supply curve represents the answer to questions of the form: "How many taxi rides would taxi drivers supply at a price of \$5 each?" But we can also reverse this question to ask: "At what price will producers be willing to supply 10 million rides per year?" The price at which producers will supply a given quantity—in this case, 10 million rides at \$5 per ride—is the **supply price** of that quantity. We can see from the supply schedule in Figure 9.1 that the supply price of 6 million rides is \$3 per ride, the supply price of 7 million rides is \$3.50 per ride, and so on.

Now we are ready to analyze a quota. We have assumed that the city government limits the quantity of taxi rides to 8 million per year. Medallions, each of which carries the right to provide a certain number of taxi rides per year, are made available to selected people in such a way that a total of 8 million rides will be provided. Medallion holders may then either drive their own taxis or rent their medallions to others for a fee.

Figure 9.2 shows the resulting market for taxi rides, with the black vertical line at 8 million rides per year representing the quota. Because the quantity of rides is limited to 8 million, consumers must be at point A on the demand curve, corresponding to the shaded entry in the demand schedule: the demand price of 8 million rides is

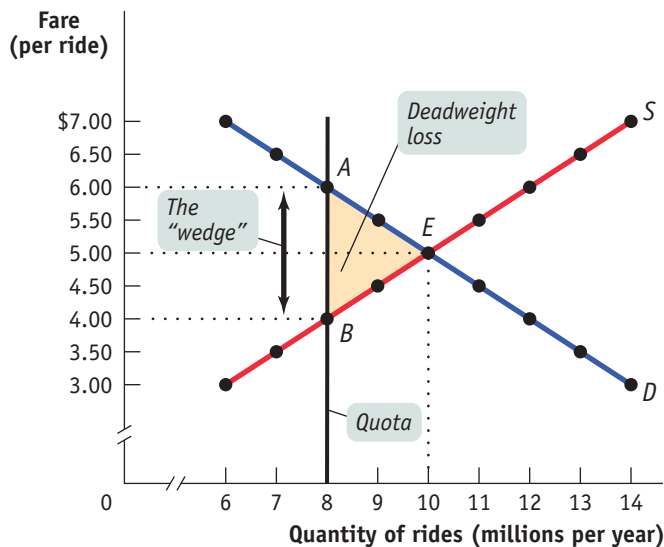


Ann Heath

The **demand price** of a given quantity is the price at which consumers will demand that quantity.

The **supply price** of a given quantity is the price at which producers will supply that quantity.

Figure 9.2 Effect of a Quota on the Market for Taxi Rides



Fare (per ride)	Quantity of rides (millions per year)	
	Quantity demanded	Quantity supplied
\$7.00	6	14
6.50	7	13
6.00	8	12
5.50	9	11
5.00	10	10
4.50	11	9
4.00	12	8
3.50	13	7
3.00	14	6

The table shows the demand price and the supply price corresponding to each quantity: the price at which that quantity would be demanded and supplied, respectively. The city government imposes a quota of 8 million rides by selling enough medallions for only 8 million rides, represented by the black vertical line. The price paid by consumers rises to \$6 per ride, the demand price of 8 million rides, shown by point A.

The supply price of 8 million rides is only \$4 per ride, shown by point B. The difference between these two prices is the quota rent per ride, the earnings that accrue to the owner of a medallion. The quota rent drives a wedge between the demand price and the supply price. Because the quota discourages mutually beneficial transactions, it creates a *deadweight loss* equal to the shaded triangle.

AP[®] EXAM TIP

You won't have to draw the quota graph on the AP[®] exam, but you will have to understand the implications of quotas on quantity and deadweight loss. Drawing a quick graph will lead you to relevant answers. Start with a market in equilibrium. Add a vertical line to the left of the equilibrium quantity to illustrate a quota (note: a quota to the right of equilibrium quantity will have no effect). Where the quota line crosses the demand and supply curves gives you the demand and supply prices. The deadweight loss is the triangle to the right of the "wedge" between these prices, below the demand curve, and above the supply curve.

\$6 per ride. Meanwhile, taxi drivers must be at point B on the supply curve, corresponding to the shaded entry in the supply schedule: the supply price of 8 million rides is \$4 per ride.

But how can the price received by taxi drivers be \$4 when the price paid by taxi riders is \$6? The answer is that in addition to the market in taxi rides, there is also a market in medallions. Medallion-holders may not always want to drive their taxis: they may be ill or on vacation. Those who do not want to drive their own taxis will sell the right to use the medallion to someone else. So we need to consider two sets of transactions here, and so two prices: (1) the transactions in taxi rides and the price at which these will occur and (2) the transactions in medallions and the price at which these will occur. It turns out that since we are looking at two markets, the \$4 and \$6 prices will both be right.

To see how all of this works, consider two imaginary New York taxi drivers, Sunil and Harriet. Sunil has a medallion but can't use it because he's recovering from a severely sprained wrist. So he's looking to rent his medallion out to someone else. Harriet doesn't have a medallion but would like to rent one. Furthermore, at any point in time there are many other people like Harriet who would like to rent a medallion. Suppose Sunil agrees to rent his medallion to Harriet. To make things simple, assume that any driver can give only one ride per day and that Sunil is renting his medallion to Harriet for one day. What rental price will they agree on?

To answer this question, we need to look at the transactions from the viewpoints of both drivers. Once she has the medallion, Harriet knows she can make \$6 per day—the demand price of a ride under the quota. And she is willing to rent the medallion only if she makes at least \$4 per day—the supply price of a ride under the quota. So Sunil cannot demand a rent of more than \$2—the difference between \$6 and \$4. And if Harriet offered Sunil less than \$2—say, \$1.50—there would be other eager drivers willing to offer him more, up to \$2. So, in order to get the medallion, Harriet must

offer Sunil at least \$2. Since the rent can be no more than \$2 and no less than \$2, it must be exactly \$2.

It is no coincidence that \$2 is exactly the difference between \$6, the demand price of 8 million rides, and \$4, the supply price of 8 million rides. In every case in which the supply of a good is legally restricted, there is a **wedge** between the demand price of the quantity transacted and the supply price of the quantity transacted. This wedge, illustrated by the double-headed arrow in Figure 9.2, has a special name: the **quota rent**. It is the earnings that accrue to the medallion holder from ownership of a valuable commodity, the medallion. In the case of Sunil and Harriet, the quota rent of \$2 goes to Sunil because he owns the medallion, and the remaining \$4 from the total fare of \$6 goes to Harriet.

So Figure 9.2 also illustrates the quota rent in the market for New York taxi rides. The quota limits the quantity of rides to 8 million per year, a quantity at which the demand price of \$6 exceeds the supply price of \$4. The wedge between these two prices, \$2, is the quota rent that results from the restrictions placed on the quantity of taxi rides in this market.

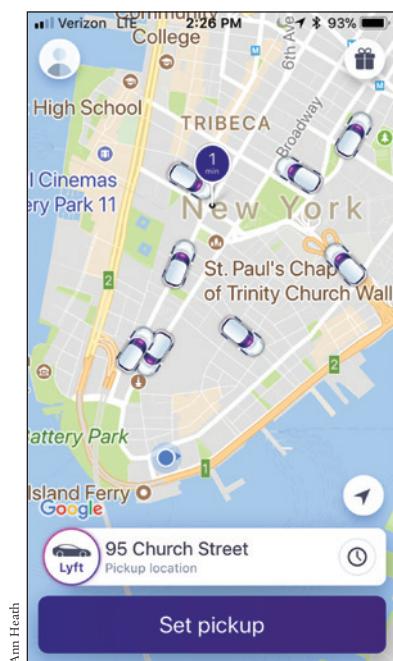
But wait a second. What if Sunil doesn't rent out his medallion? What if he uses it himself? Doesn't this mean that he gets a price of \$6? No, not really. Even if Sunil doesn't rent out his medallion, he could have rented it out, which means that the medallion has an *opportunity cost* of \$2: if Sunil decides to use his own medallion and drive his own taxi rather than renting his medallion to Harriet, the \$2 represents his opportunity cost of not renting out his medallion. That is, the \$2 quota rent is now the rental income he forgoes by driving his own taxi. In effect, Sunil is in two businesses—the taxi-driving business and the medallion-renting business. He makes \$4 per ride from driving his taxi and \$2 per ride from renting out his medallion. It doesn't make any difference that in this particular case he has rented his medallion to himself! So regardless of whether the medallion owner uses the medallion himself or herself, or rents it to others, it is a valuable asset. And this is represented in the going price for a New York City taxi medallion. Notice, by the way, that quotas—like price ceilings and price floors—don't always have a real effect. If the quota were set at 12 million rides—that is, above the equilibrium quantity in an unregulated market—it would have no effect because it would not be binding.

A quantity control, or quota, drives a **wedge** between the demand price and the supply price of a good; that is, the price paid by buyers ends up being higher than that received by sellers. The difference between the demand and supply price at the quota amount is the **quota rent**, the earnings that accrue to the license-holder from ownership of the right to sell the good. It is equal to the market price of the license when the licenses are traded.

The Costs of Quantity Controls

Like price controls, quantity controls can have some predictable and undesirable side effects. The first is the by-now-familiar problem of inefficiency due to missed opportunities: quantity controls prevent mutually beneficial transactions from occurring, transactions that would benefit both buyers and sellers. Looking back at Figure 9.2, you can see that starting at the quota of 8 million rides, New Yorkers would be willing to pay at least \$5.50 per ride for an additional 1 million rides and that taxi drivers would be willing to provide those rides as long as they got at least \$4.50 per ride. These are rides that would have taken place if there had been no quota. The same is true for the next 1 million rides: New Yorkers would be willing to pay at least \$5 per ride when the quantity of rides is increased from 9 to 10 million, and taxi drivers would be willing to provide those rides as long as they got at least \$5 per ride. Again, these rides would have occurred without the quota. Only when the market has reached the unregulated market equilibrium quantity of 10 million rides are there no “missed-opportunity rides”—the quota of 8 million rides has caused 2 million “missed-opportunity rides.” A buyer would be willing to buy the good at a price that the seller would be willing to accept, but such a transaction does not occur because it is forbidden by the quota. Economists have a special term for the lost gains from missed opportunities such as these: **deadweight loss**. Generally, when the demand price exceeds the supply price, there is a deadweight loss. Figure 9.2 illustrates the deadweight loss with a shaded triangle between the demand and supply curves. This triangle represents the missed gains from taxi rides

Deadweight loss is the value of forgone mutually beneficial transactions.



prevented by the quota, a loss that is experienced by both disappointed would-be riders and frustrated would-be drivers.

Because there are transactions that people would like to make but are not allowed to, quantity controls generate an incentive to get around or even break the law. Taxi regulation applies only to those drivers who are hailed by passengers on the street. A car service that makes prearranged pickups does not need a medallion. This distinction gives an advantage to ride-sharing services, such as Uber and Lyft, that compete with taxis to provide rides. Ride-sharing services allow registered individuals to provide ride services using their own vehicles. Between 2006 and 2016, New York City taxi trips fell by more than 100,000 per month as the number of cars connected with Uber grew to over 46,000, and taxi fares fell by almost 4%. Taxis are still subject to regulations that don't apply to the new ride-sharing services, while the increased competition has reduced taxi fares. As a result, many medallion owners are finding it increasingly difficult to make a profit, and the value of taxi medallions has fallen from a high of \$1.3 million just a few years ago to under \$250,000 in 2017.

In the previous Module, we saw price controls result in black market activity. Here we see quantity controls lead to innovation in the market for taxi rides that diminishes the value of taxi medallions. The examples in these Modules illustrate that it is difficult for government to control market forces—and attempts to implement price and quantity controls lead to predictable—and often undesirable—consequences.

MODULE 9 REVIEW

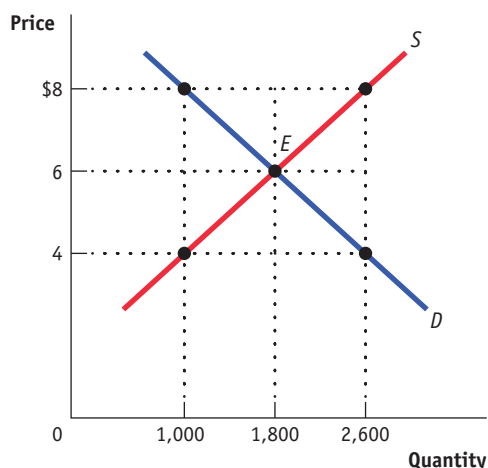
Check Your Understanding

- Suppose that the supply and demand for taxi rides is given by Figure 9.1 and a quota is set at 6 million rides. Replicate the graph from Figure 9.1, and identify each of the following on your graph:
 - the price of a ride
 - the quota rent
 - the deadweight loss resulting from the quota.
 Suppose the quota on taxi rides is increased to 9 million.
 - What happens to the quota rent and the deadweight loss?
- Again replicate the graph from Figure 9.1. Suppose that the quota is 8 million rides and that demand decreases due to a decline in tourism. Show on your graph the smallest parallel leftward shift in demand that would result in the quota no longer having an effect on the market.

TACKLE THE AP® TEST: Multiple-Choice Questions

- Which of the following gives its owner the right to supply a good or service?
 - a quota
 - a license
 - a supply price
 - a wedge
 - paying the quota rent
- Which of the following leads to efficiency in a market?
 - a price ceiling
 - a price floor
 - a quantity control
 - a quota
 - none of the above

Refer to the graph provided for Questions 3–5.

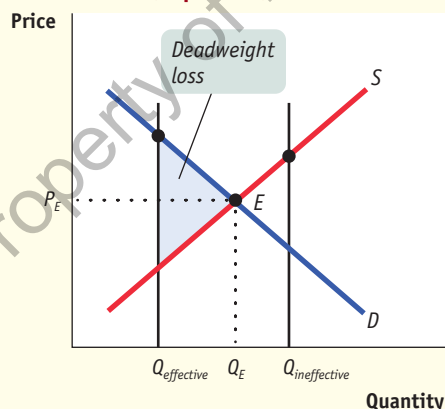


3. If the government established a quota of 1,000 in this market, the demand price would be
 - a. less than \$4.
 - b. \$4.
 - c. \$6.
 - d. \$8.
 - e. more than \$8.
4. If the government established a quota of 1,000 in this market, the supply price would be
 - a. less than \$4.
 - b. \$4.
 - c. \$6.
 - d. \$8.
 - e. more than \$8.
5. If the government established a quota of 1,000 in this market, the quota rent would be
 - a. \$2.
 - b. \$4.
 - c. \$6.
 - d. \$8.
 - e. more than \$8.
6. Binding quotas lead to which of the following?
 - a. inefficiency due to missed opportunities
 - b. incentives to evade or break the law
 - c. a shortage in the market
 - d. deadweight loss
 - e. all of the above
7. Which of the following would decrease the effect a quota has on the quantity sold in a market?
 - a. decrease in demand
 - b. increase in supply
 - c. increase in demand
 - d. price ceiling above the equilibrium price
 - e. none of the above

TACKLE THE AP® TEST: Free-Response Questions

1. Draw a correctly labeled graph illustrating hypothetical supply and demand curves for the U.S. automobile market. Label the equilibrium price and quantity. Suppose the government institutes a quota to limit automobile production. Draw a vertical line labeled " $Q_{ineffective}$ " to show the level of a quota that would have no effect on the market. Draw a vertical line labeled " $Q_{effective}$ " to show the level of a quota that would have an effect on the market. Shade in and label the deadweight loss resulting from the effective quota.

Rubric for the FRQ (5 points)



1 point: Correctly labeled supply and demand diagram (vertical axis labeled "Price" or " P ," horizontal axis labeled "Quantity" or " Q ," upward-sloping supply curve with label, downward-sloping demand curve with label)

1 point: Equilibrium at the intersection of supply and demand with the equilibrium price labeled on the vertical axis and the equilibrium quantity labeled on the horizontal axis

1 point: Vertical line to the right of equilibrium quantity labeled $Q_{ineffective}$

1 point: Vertical line to the left of equilibrium quantity labeled $Q_{effective}$

1 point: The triangle to the right of the effective quota line and to the left of supply and demand curves shaded in and labeled as the deadweight loss

2. Draw a correctly labeled graph of the market for taxicab rides. On the graph, draw and label a vertical line showing the level of an effective quota. Label the demand price, the supply price, and the quota rent. (6 points)



Adventures in AP® Economics Videos

Mod 5: Demand

Mod 6: Supply

Mod 7: Market Equilibrium

Module 5

1. The **supply and demand model** illustrates how a **competitive market**, one with many buyers and sellers of the same product, works.
2. The **demand schedule** shows the **quantity demanded** at each price and is represented graphically by a **demand curve**. The **law of demand** says that demand curves slope downward, meaning that as price decreases, the quantity demanded increases.
3. A **movement along the demand curve** occurs when the price changes and causes a change in the quantity demanded. When economists talk of **changes in demand**, they mean shifts of the demand curve—a

change in the quantity demanded at any given price. An increase in demand causes a rightward shift of the demand curve. A decrease in demand causes a leftward shift.

4. There are five main factors that shift the demand curve:
 - a change in tastes
 - a change in the prices of related goods, such as **substitutes** or **complements**
 - a change in income: when income rises, the demand for **normal goods** increases and the demand for **inferior goods** decreases
 - a change in expectations

Module 6

5. The **supply schedule** shows the **quantity supplied** at each price and is represented graphically by a **supply curve**. According to the **law of supply**, supply curves slope upward, meaning that as price increases, the quantity supplied increases.
6. A **movement along the supply curve** occurs when the price changes and causes a change in the quantity supplied. When economists talk of **changes in supply**, they mean shifts of the supply curve—a change in

the quantity supplied at any given price. An increase in supply causes a rightward shift of the supply curve. A decrease in supply causes a leftward shift.

7. There are five main factors that shift the supply curve:
 - a change in **input** prices
 - a change in the prices of related goods and services
 - a change in expectations
 - a change in the number of producers
 - a change in technology

Module 7

8. An economic situation is in **equilibrium** when no individual would be better off doing something different. The supply and demand model is based on the principle that the price in a market moves to its **equilibrium price**, or market-clearing price, the price at which the quantity demanded is equal to the quantity supplied. This quantity is the **equilibrium quantity**. When the price is above its market-clearing level, there is a **surplus** that pushes the price down. When the price is below its market-clearing level, there is a **shortage** that pushes the price up.
9. An increase in demand increases both the equilibrium price and the equilibrium quantity; a decrease in

demand has the opposite effect. An increase in supply reduces the equilibrium price and increases the equilibrium quantity; a decrease in supply has the opposite effect.

10. Shifts of the demand curve and the supply curve can happen simultaneously. When they shift in opposite directions, the change in price is predictable but the change in quantity is not. When they shift in the same direction, the change in quantity is predictable but the change in price is not. In general, the curve that shifts the greater distance has a greater effect on the changes in price and quantity.

Module 8

11. Even when a market is efficient, governments often intervene to pursue greater fairness or to please a powerful interest group. Interventions can take the form of **price controls** or quantity controls (quotas), both of which generate predictable and undesirable side effects, consisting of various forms of inefficiency and illegal activity.

12. A **price ceiling**, a maximum market price below the equilibrium price, benefits successful buyers but creates persistent shortages. Because the price is maintained below the equilibrium price, the quantity demanded is increased and the quantity supplied is decreased compared to the equilibrium quantity. This leads to predictable problems, including **inefficient allocation**

to consumers, wasted resources, and inefficiently low quality. It also encourages illegal activity as people turn to **black markets** to get the good. Because of these problems, price ceilings have generally lost favor as an economic policy tool. But some governments continue to impose them either because they don't understand the effects or because the price ceilings benefit some influential group.

13. A **price floor**, a minimum market price above the equilibrium price, benefits successful sellers but creates a

persistent surplus: because the price is maintained above the equilibrium price, the quantity demanded is decreased and the quantity supplied is increased compared to the equilibrium quantity. This leads to predictable problems: inefficiencies in the form of **inefficient allocation of sales among sellers**, wasted resources, and **inefficiently high quality**. It also encourages illegal activity and black markets. The most well-known kind of price floor is the **minimum wage**, but price floors are also commonly applied to agricultural products.

Module 9

14. **Quantity controls**, or **quotas**, limit the quantity of a good that can be bought or sold. The government issues **licenses** to individuals, the right to sell a given quantity of the good. The owner of a license earns a **quota rent**, earnings that accrue from ownership of the right to sell the good. It is equal to the difference between the **demand price** at the quota amount, what consumers are willing to pay for that amount, and the **supply price** at the quota

amount, what suppliers are willing to accept for that amount. Economists say that a quota drives a **wedge** between the demand price and the supply price; this wedge is equal to the **quota rent**. By limiting mutually beneficial transactions, quantity controls generate inefficiency. Like price controls, quantity controls lead to **deadweight loss** and encourage innovation or illegal activity.

Key Terms

Competitive market, p. 50
Supply and demand model, p. 50

Demand schedule, p. 51

Quantity demanded, p. 52

Demand curve, p. 52

Law of demand, p. 52

Change in demand, p. 52

Movement along the demand curve, p. 53

Substitutes, p. 56

Complements, p. 56

Normal good, p. 56

Inferior good, p. 56

Individual demand curve, p. 57

Quantity supplied, p. 60

Supply schedule, p. 60

Supply curve, p. 60

Law of supply, p. 60

Change in supply, p. 60

Movement along the supply curve, p. 62

Input, p. 63

Individual supply curve, p. 65

Equilibrium, p. 68

Equilibrium price, p. 68

Equilibrium quantity, p. 68

Surplus, p. 70

Shortage, p. 71

Price controls, p. 77

Price ceiling, p. 77

Price floor, p. 77

Inefficient allocation to consumers, p. 80

Wasted resources, p. 80

Inefficiently low quality, p. 80

Black market, p. 81

Minimum wage, p. 82

Inefficient allocation of sales among sellers, p. 83

Inefficiently high quality, p. 84

Quantity control or quota, p. 88

License, p. 88

Demand price, p. 89

Supply price, p. 89

Wedge, p. 91

Quota rent, p. 91

Deadweight loss, p. 91

AP[®] Exam Practice Questions

Multiple-Choice Questions

- Which of the following changes will most likely result in an increase in the demand for hamburgers in your hometown?
 - The price of hot dogs decreases.
 - The price of drinks sold at hamburger restaurants increases.
 - Income in your town decreases and hamburgers are a normal good.
 - The local newspaper publishes a story on health problems caused by red meat.
 - The number of vegetarians in your town decreases and the population size remains the same.

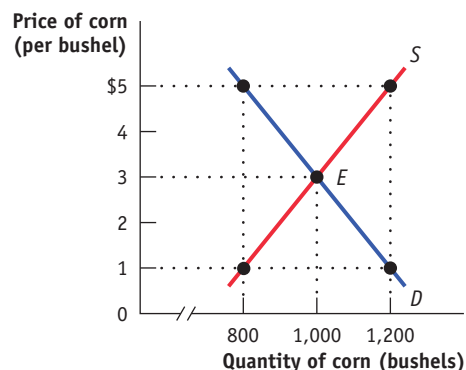
2. Which of the following changes will most likely result in a decrease in the supply of guitars?
 - a. The popularity of guitar music increases.
 - b. Consumer incomes decrease.
 - c. A new firm enters the guitar industry.
 - d. The guitar-making process is reengineered to be more efficient.
 - e. The wages of guitar makers increase.
3. Which of the following will most likely result in a decrease in the quantity of lemons demanded?
 - a. an increase in the price of lemons
 - b. an increase in the price of limes
 - c. an increase in the price of lemonade
 - d. an increase in the number of lemonade stands
 - e. a decrease in consumer income
4. Which of the following will occur if consumer incomes increase?
 - a. The demand for inferior goods will increase.
 - b. The demand for normal goods will increase.
 - c. The demand for all goods will increase.
 - d. The demand for normal goods will decrease.
 - e. The demand for all goods will decrease.
5. If two goods are complements, an increase in the price of one good will cause which of the following?
 - a. a decrease in the demand for the other
 - b. a decrease in the quantity demanded of the other
 - c. an increase in the demand for the other
 - d. an increase in the quantity demanded of the other
 - e. no change in the demand for the other
6. An increase in the wages of workers producing a good will most likely lead to which of the following?
 - a. a decrease in the quantity of the good supplied
 - b. a decrease in the supply of the good
 - c. an increase in the quantity of the good supplied
 - d. an increase in the supply of the good
 - e. no change in the supply of the good
7. Which of the following is true at the equilibrium price in a market?
 - a. Consumers who purchase the good may be better off buying something else instead.
 - b. The market has not yet cleared.
 - c. There is a tendency for the price to decrease over time.

- d. There may be either a surplus or a shortage of the good.
- e. The quantity demanded of the good equals the quantity supplied.

8. A survey indicated that chocolate is America's favorite ice cream flavor. Which of the following will lead to a decrease in the price of chocolate ice cream?
 - a. A drought in the Midwest causes farmers to reduce the number of dairy cows they raise.
 - b. A new report from the American Medical Association concludes that chocolate has significant health benefits.
 - c. The price of vanilla ice cream increases.
 - d. New freezer technology lowers the cost of producing ice cream.
 - e. The price of ice cream toppings decreases.
9. Which of the following events will increase both the price and the quantity of pizza?
 - a. The price of mozzarella cheese increases.
 - b. New health hazards of eating pizza are widely publicized.
 - c. The price of pizza ovens rises.
 - d. Consumers expect the price of pizza to fall next week.
 - e. Consumer income falls and pizza is an inferior good.

Use the following situation and diagram to answer Questions 10–15.

For the last 70 years, the U.S. government has used price supports to provide income assistance to U.S. farmers. At times, the government has used price floors, which it maintains by buying up the surplus farm products. At other times, it has used target prices, giving the farmer an amount equal to the difference between the market price and the target price for each unit sold.



10. What are the equilibrium price and quantity in the market for corn?

Price	Quantity
a. \$1	800
b. \$1	1,200
c. \$3	1,000
d. \$5	800
e. \$5	1,200

11. If the government sets a price floor of \$5 per bushel, how many bushels of corn are produced?

- a. 0
- b. 400
- c. 800
- d. 1,000
- e. 1,200

12. If the government sets a price floor of \$5 per bushel, how many bushels of corn are purchased by consumers?

- a. 0
- b. 400
- c. 800
- d. 1,000
- e. 1,200

13. How many bushels of corn are purchased by the government if it maintains a price floor of \$5 by buying all surplus corn?

- a. 0
- b. 400
- c. 800
- d. 1,000
- e. 1,200

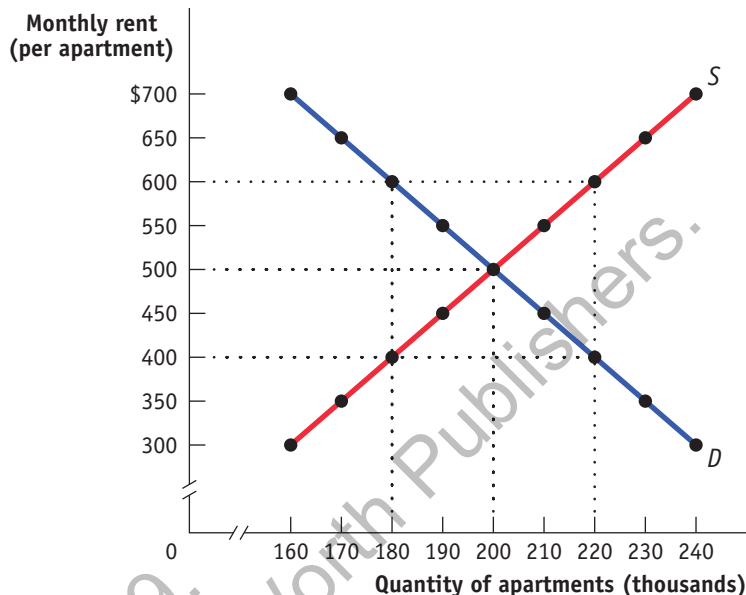
14. How much does a price floor of \$5 cost the government if it maintains the price floor by buying any surplus corn?

- a. \$0
- b. \$2,000
- c. \$4,000
- d. \$5,000
- e. \$6,000

15. How much revenue do corn farmers receive if there is a price floor at \$5?

- a. \$0
- b. \$1,200
- c. \$3,000
- d. \$4,000
- e. \$6,000

Use the following diagram to answer Questions 16–20.



16. Where must an effective price ceiling in this market be set?

- a. at \$500
- b. above \$400
- c. above \$500
- d. below \$600
- e. below \$500

17. If the government sets a price ceiling at \$400, how many apartments will be demanded by consumers?

- a. 0
- b. 40,000
- c. 180,000
- d. 200,000
- e. 220,000

18. How many apartments will be offered for rent if the government sets a price ceiling at \$400?

- a. 0
- b. 40,000
- c. 180,000
- d. 200,000
- e. 220,000

19. A price ceiling set at \$400 will result in which of the following in the market for apartments?

- a. a surplus of 40,000 apartments
- b. a surplus of 220,000 apartments
- c. no surplus or shortage
- d. a shortage of 40,000 apartments
- e. a shortage of 220,000 apartments

20. A price ceiling set at \$600 will result in which of the following in the market for apartments?

- a. a surplus of 40,000 apartments
- b. a surplus of 220,000 apartments
- c. no surplus or shortage
- d. a shortage of 40,000 apartments
- e. a shortage of 220,000 apartments

Refer to the following table and information to answer Questions 21–24.

Only fishing boats licensed by the U.S. government are allowed to catch swordfish in the waters off the North Atlantic coast. The following table shows hypothetical demand and supply schedules for swordfish caught in the United States each year.

Price of swordfish (per pound)	Quantity of swordfish (millions of pounds per year)	
	Quantity demanded	Quantity supplied
\$20	6	15
18	7	13
16	8	11
14	9	9
12	10	7

21. If the government establishes a quota of 7 million pounds in the market, what will the demand price of swordfish be (per pound)?
 - a. \$20
 - b. \$18
 - c. \$16
 - d. \$14
 - e. \$12
22. If the government establishes a quota of 7 million pounds in the market, what will the supply price of swordfish be (per pound)?
 - a. \$20
 - b. \$18
 - c. \$16
 - d. \$14
 - e. \$12
23. What is the quota rent per pound of swordfish received by licensed fishing boats when the government sets a quota of 7 million pounds?
 - a. \$0
 - b. \$6
 - c. \$12
 - d. \$18
 - e. \$30
24. If there is a quota of 7 million pounds and swordfish fishing licenses are traded in a market, how much will the price of a fishing license be per pound?
 - a. \$0
 - b. \$6
 - c. \$12
 - d. \$18
 - e. \$30
25. When transactions do not occur due to price or quantity controls, what is the term for the lost gains?
 - a. wasted resources
 - b. inefficient quality
 - c. price wedge
 - d. black market losses
 - e. deadweight loss

Free-Response Questions

1. Pablo Picasso painted only 1,000 paintings during his “Blue Period.”
 - a. Draw a correctly labeled graph of the market for Picasso “Blue Period” paintings showing each of the following:
 - i. the supply and demand curves for paintings
 - ii. the equilibrium price and quantity of paintings
 - b. List the five principal factors that will lead to a change in the price of paintings in this market.
 - c. Show the effect on price in your market for paintings if wealthy art collectors decide that it is essential to acquire Picasso “Blue Period” paintings for their collections. (5 points)
2. The market for less-skilled labor in a large city is perfectly competitive.
 - a. Draw a correctly labeled graph of the market for less skilled labor showing each of the following:
 - i. the supply of labor and the demand for labor
 - ii. the equilibrium wage and quantity of labor (measured as the number of workers)
 - b. On your graph from part a, illustrate the effect of an advance in technology that makes workers more productive. Identify the new equilibrium price and quantity as P_{new} and Q_{new} .
 - c. Assume that after the advance in technology, the government decides to impose a minimum wage. On your graph, draw a line indicating an effective minimum wage. (8 points)
3. Assume the market for sandals is perfectly competitive.
 - a. Draw a correctly labeled graph of the market for sandals showing each of the following:
 - i. the supply of sandals and the demand for sandals
 - ii. the equilibrium price and quantity in the market for sandals, labeled P_1 and Q_1
 - b. On your graph from part a, illustrate the effect on the equilibrium price and quantity of sandals if consumer income increases and sandals are a normal good. Label the new equilibrium price and quantity P_2 and Q_2 .
 - c. If the wages of workers producing sandals decrease at the same time consumer income increases, will the equilibrium quantity of sandals increase, decrease, or remain the same compared to Q_1 and P_1 ? Explain. (8 points)

The Coffee Market's Hot; Why Are Bean Prices Not?

Insights into Supply and Demand

Under fifteenth-century Turkish law, a wife could divorce her husband if he failed to provide her with a daily quota of coffee. Coffee is no longer grounds for divorce, but it is the world's most popular beverage after water and a common element of cozy getaways and productive workdays. Diamonds are another element that cements marriages, but although the price of diamonds drives people to steal, coffee beans have become a steal, costing only a few dollars a pound in the retail market. The paradoxical fall of coffee prices as popularity rises can be explained with the allied concepts of supply and demand.



Charicle/Alamy

Supply, Demand, and the Great Explorers

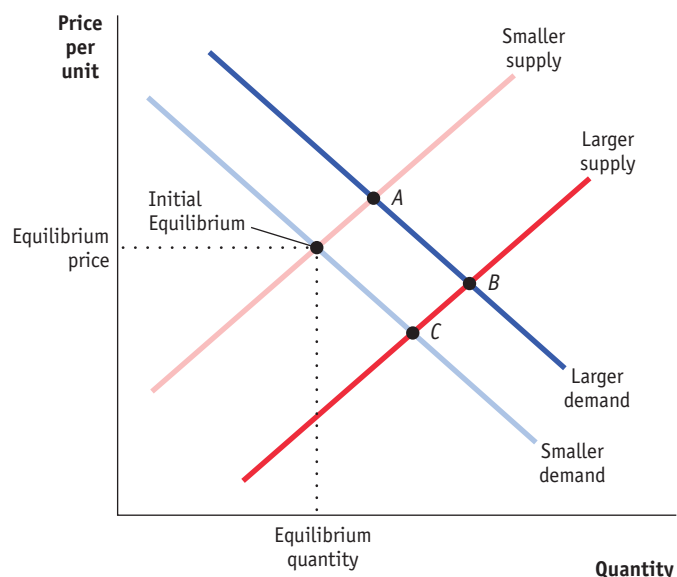
The story of supply and demand began long ago. Let's pick it up with the great explorers of the fifteenth and sixteenth centuries. In 1492, Christopher Columbus sailed the ocean blue in search of a westward route to Asia and its gold. In 1519, Ferdinand Magellan proved that the Earth is round on an expedition to the Spice Islands, where cinnamon, nutmeg, and cloves were abundant. The royalty of Spain paid generously for these trips because gold was precious and, at that time in Europe, some spices were worth more than their weight in gold. Why were these products so expensive? Because the combination of high demand and limited supply leads to high prices. Thanks to the incentives that high prices provide, new trade routes were established, supply increased, and spices became affordable. In other words, Europeans came to America and you

can have cinnamon in your latte thanks to the workings of supply and demand.

Because they explain so much, let's explore the concepts of supply and demand.

Supply

The supply curve exhibits the relationship between the price and the quantity supplied. According to the "law" of supply, as the price increases, the quantity suppliers would be willing to supply increases, and as the price decreases, the willingly supplied quantity decreases. This suggests, for example, that the Reno Philharmonic Orchestra would be willing to put on more performances per week if it could command an \$80 ticket price than if it could command a \$60 ticket price. This positive relationship between price and quantity is illustrated by the upward slope of the supply curve in the accompanying diagram.



It is likely that the law of supply describes your own behavior as well. Think about how many hours of burger flipping, lawn mowing, or babysitting you would supply per week at various prices. If you would supply more

hours for \$50 per hour than for \$5 per hour, your supply curve has an upward slope. Let's examine why that's probably the case, using the economic concept of opportunity cost.

The *opportunity cost* of a particular action is the value of the next-best alternative action. Part of the opportunity cost of going to college is the money you could have earned working at McDonald's instead. The opportunity cost of an hour of babysitting is the value you would have received from your next-best use of that hour. Your first hour of babysitting would substitute for the least valuable alternative activity that day—perhaps perusing YouTube. Additional hours of babysitting must be carved out of more and more valuable alternatives, such as spending time with friends, sleeping, and (as a last resort!) studying economics. Losses of activities like these constitute the opportunity cost of each hour of babysitting. You are rational to babysit until the opportunity cost of one more hour of babysitting would be the loss of an activity that you value more highly than the hourly wage for babysitting. Your babysitting will obey the law of supply because an increase in the wage (that is, an increase in the price of babysitting) justifies the loss of additional alternative activities and makes you willing to supply a larger quantity of babysitting hours.

In some cases opportunity costs rise because, to make more and more of a good, producers must use inputs that are less and less specialized for making that good. For instance, farmers begin producing soybeans on the land best suited for that crop. As more soybeans are grown, farmers must use land that is less suitable for soybeans, which means lower yields or larger expenditures on fertilizers and irrigation. Similarly, as more silver is mined, mines must be dug deeper and in areas with lower concentrations of silver. The rising opportunity cost of gradually shifting to ill-suited inputs causes the marginal cost to rise—the cost of making one more unit—to increase.

Even when output is increased by adding identical units of a particular input, *diminishing returns* can cause an increase in the marginal cost of production. Diminishing returns set in when successive units of one input added to a fixed quantity of another input contribute less and less to the level of output. The classic example is adding seeds to a flowerpot: if you keep adding seeds, the additional returns in terms of flowers will eventually decrease, and, at some point, there will be so many seeds in the pot that another seed will find no soil. Similarly, as more fishers are added to a fishing boat, or more tractors are added to a farm, they will eventually experience redundancy and congestion. When another unit of input contributes less to output than the preceding unit, the marginal cost rises. And with the cost of making each additional unit rising, firms require higher prices in exchange for larger quantities, and the supply curve is upward-sloping.



Junos/Getty Images

A change in the marginal cost of producing each unit shifts the supply curve. When the marginal cost falls, the supply increases, and the supply curve shifts downward and to the right (as from the light red supply curve to the dark red supply curve in the figure). For example, an improvement in fishing-net technology could lower the cost of catching fish and increase the supply. An *increase* in the marginal cost shifts the supply curve upward and to the left.

You can find the market supply curve by adding up the quantities supplied by all the individual firms at each price. Suppose the fish market consists of two firms: Fred's Fish and Fay's Fish. If, for a price of \$1 each, Fay would supply 10 fish and Fred would supply 6 fish, then the market supply is 16 fish (10 from Fay plus 6 from Fred) at \$1. The market supply at any other price is determined in the same way—by adding up the quantities supplied by all firms at that price.

Note that a change in the *price* of fish does not change the marginal cost of catching fish, so it does not shift the supply curve. Rather, it causes a movement to a new point along the existing supply curve, as from the point labeled "Initial equilibrium" to point A in the figure. To distinguish between these two types of changes, we call a movement along a stationary supply curve a *change in the quantity supplied*, and a shift in the supply curve itself a *change in supply*.

Demand

The demand curve shows the relationship between the price and the quantity demanded. The demand for a good depends on the benefits it conveys. Whether it is fish, clothing, coffee, or almost anything else, the *marginal benefit*—the benefit gained from one more—generally decreases as quantity increases because needs become satisfied and desires become satiated. The first beverage you drink in a week keeps you alive, whereas the 50th provides no such benefit. The height of the market demand curve at each quantity indicates the most that anyone would be willing to pay for that unit of the good. With benefits decreasing as individuals receive more and more of a good, the height of the market demand curve decreases, giving it a negative slope, as shown in the figure. The downward-sloping nature of the demand curve embodies the "*law*" of demand: as the price of a good decreases, the quantity demanded increases. This makes sense because lower prices justify the purchase of additional, less-valuable units.

Consider your demand for canned tuna fish. Your first can in a week provides the important benefits of protein, minerals, omega-3 fatty acids (to reduce the risk of heart disease), and a welcome break from peanut butter and jelly. Perhaps you'd pay up to \$5 for the benefits of a first can of tuna. (You are unlikely to need to pay \$5 for a can of tuna, but the demand curve describes the most you would pay if you had to, not what you must or do pay.) If so, your demand curve has a height of \$5 at the quantity of



Charles Brudao/Shutterstock.com

1. A second can of tuna provides a little more variety and more of the same nutrients. Getting those benefits for the second time in a week isn't as essential as getting them the first time, but perhaps a second can is worth \$1 to you. In that case, your demand curve has a height of \$1 at a quantity of 2. A third can is even less important and may have you craving a break from tuna fish. Let's say you would pay up to 30 cents for a third can, and you wouldn't pay anything for any more tuna. Your demand curve thus has the height of 30 cents at a quantity of 3 and a height of 0 at every higher quantity.

It is rational for you to buy cans of tuna fish until the benefit you receive from 1 more can is no longer worth at least as much as the price you must pay for it. If the price were \$6, you wouldn't buy any tuna fish because even the first can is only worth \$5 to you. If the price were \$4, you would buy 1 can because it's rational to pay \$4 for something that's worth \$5. At a price of \$1 or less, you would buy the second can, which is worth \$1 to you, and if the price were 30 cents or less, you would buy 3 cans but no more.

The market demand curve is found by adding up the quantities demanded by all individuals in the market at each price. Suppose you and I are the only consumers in the tuna fish market. If, at a price of \$1, I would buy 3 cans of tuna fish and you would buy 2, then the market demand is 5 at a price of \$1. The demand at any other price can be determined in the same way—by adding up the quantities demanded by all consumers.

Because the demand curve reflects consumers' willingness to pay for each additional unit of a good or service, the curve will shift upward and to the right, as from the light blue demand curve to the dark blue demand curve in the figure, when the willingness to pay increases. This could result from

- a change in income
- a successful advertising campaign
- expectations of an upcoming increase in prices

- an increase in the price of substitutes, such as peanut butter and jelly
- a decrease in the price of complementary goods, such as bread
- an increase in the number of tuna fish consumers

The opposite of these changes would cause the demand curve to shift downward and to the left.

The effect of a change in income depends on the type of good in question. A *normal good* is one that consumers buy more of when their incomes increase; an *inferior good* is one that consumers buy less of when their incomes increase. Whether a good is normal or inferior depends on individual preferences. For some people, tuna fish might be a normal good. A higher income might lead other people to buy more steak and less tuna fish, so for them, steak would be normal and tuna fish would be inferior. Other examples of goods that are inferior for some people include secondhand clothing, rides on public buses, store-brand soda, and Spam. An increase in income shifts the demand curves for normal goods upward and to the right, and shifts the demand curves for inferior goods downward and to the left. Again, the opposite is also true.

The Marriage of Supply and Demand

The supply and demand curves reside on the same graph, with the price per unit measured on the vertical axis and the quantity of a particular good measured on the horizontal axis. The curves meet at the *equilibrium point*, which is so named because it represents a balance between the quantity demanded and the quantity supplied. The price directly to the left of the equilibrium point is the *equilibrium price*, and the quantity directly below the equilibrium point is the *equilibrium quantity*. If the price is initially set above the equilibrium price, the quantity supplied will exceed the quantity demanded, and the resulting surplus will lead suppliers to lower their price. If the price begins below the equilibrium price, the quantity demanded will exceed the quantity supplied, and the resulting shortage will motivate an increase in the price. Thus, we expect the price to reach the equilibrium level and stay there until a shift occurs in either the supply curve or the demand curve. We can find the effect of any shift by drawing the new curve and comparing the new and old equilibrium points.

Now we are equipped to explain the happenings in the spice and coffee markets of the past and present. In the sixteenth century, the supply of cinnamon in Europe was very small. We represent a relatively small supply with the light red “smaller supply” curve on the left side of the graph. Suppose the light blue “smaller demand” curve represents demand. To discover the influence of supply fluctuations on price, compare the price level (height) at the initial equilibrium of the light-colored supply and demand curves and at equilibrium point C at the intersection of the dark blue “larger supply” curve and the light

blue demand curve. With limited supply, the price is higher, which helps to explain the high equilibrium price fetched by cinnamon and other spices imported by Europeans 500 years ago. The supply of spices to Europe and America increased dramatically after Columbus, Magellan, and other explorers established faster and safer trade routes to Asia. As more and more ships brought spices to Western shores, the supply curve shifted from left to right and the equilibrium price fell.

The Coffee Crisis

To examine recent activity in the coffee market, we must consider the effect on prices of changes in demand. Starting again at the initial equilibrium of the light-colored demand and supply curves in the figure, an increase in the popularity of coffee shifts the demand curve to the right. This demand shift indicates that people are willing to buy more coffee at any given price. What happens to the equilibrium price when demand increases? It rises to the level of equilibrium point *A*, and the higher price entices an increase in the quantity of coffee supplied. Note that the change in demand has not affected the cost of producing coffee, which depends on input costs rather than demand, so the supply curve does not shift. Point *A* is on the same supply curve that we started with, but the price has risen because the demand curve shifted outward.

U.S. consumers demand roughly \$2.4 trillion worth of imported goods annually. The United States is the largest importer of coffee, which, after oil, is the most traded commodity in the world. More than 500 billion cups of coffee are consumed worldwide each year. But as increasing demand led Starbucks, Inc., to open tens of thousands of retail outlets around the world, the price of coffee beans declined. Let's examine the paradox of coffee prices in the context of supply and demand.



Teerawut Masawat/Alamy

The price of coffee rose fairly steadily in the 2000s and reached \$2.89 per pound in the world market in 2011. This price provided healthy profits for coffee growers and led to a rapid expansion in the allocation of land to coffee farming in countries such as Vietnam and Brazil. The fruits of these plantings became available three years later. Although coffee demand was robust during that period, supply increased by *even more than* demand. The dark-colored curves in the figure

represent the larger demand and the much larger supply of coffee in the mid-to-late 2010s. An increase in demand lifts prices, but an increase in supply lowers them, and the downward effect on prices was dominant in this case. Despite the large demand, prices were depressed by the overarching supply glut. Prices as low as \$1.00 per pound sunk the incomes of some 25 million farmers in 50 countries. Over time, some farmers have been able to respond to the low prices by switching to other crops. The resulting decrease in supply, and its upward influence on prices, mark the beginning of the end of the latest coffee crisis.

Conclusion

Supply is determined by the marginal cost of production, which generally increases with quantity. Demand is determined by marginal benefit, which tends to fall as quantity increases. The price-setting duo of supply and demand, along with the predominant influence of a large supply of coffee beans, explain why coffee prices are low despite the long lines at Starbucks. Similar paradoxes abound. Why are essentials, such as food and water, inexpensive, whereas nonessential jewels and professional ball players command lofty prices? The answer lies in the abundant supply of food and water and the limited availability of jewels and great ball players. Sometimes it is the demand side that is neglected. Struggles to combat high oil prices have focused on the supply side—seeking new sources and tapping into petroleum reserves. A decrease in the demand for oil would also lower prices, although that may be unlikely given consumers' appetite for gasoline consumption. Whether trying to explain, predict, or influence prices, keep in mind that supply and demand work together to determine price and that both can be influenced by policy.

Critical Thinking Questions

1. Although the supply of Jeeps expanded in the late 2010s, people were paying higher prices than ever for those vehicles. Explain how an increase in price can accompany an increase in supply.
2. As your income increases, what do you think will happen to your demand curve for Folgers Coffee? What will happen to your demand curve for Starbucks coffee? Are these goods, therefore, normal or inferior for you?
3. To help coffee farmers, some organizations sell "fair trade" coffee for a price that is higher than the price of most other coffee. Why do you suppose they are able to sell some coffee at the higher price? What would happen to the quantity of coffee supplied and demanded if a law prevented the price of coffee from falling below the fair-trade price?